

G V V Sharma

Problem 1. For $x \in \mathbf{R}$, $x \neq 0$, $x \neq 1$, let $f_0(x) = \frac{1}{1-x}$ and $f_{n+1}(x) = f_0(f_n(x))$, $n = 0, 1, \dots$. Then find the value of $f_{100}(3) + f_1\left(\frac{2}{3}\right) + f_2\left(\frac{3}{2}\right)$.

Solution: From the given information,

$$f_1(x) = f_0(f_0(x)) = \frac{1}{1 - \frac{1}{1-x}} = \frac{1-x}{-x}, \quad (1.1)$$

$$f_2(x) = f_0(f_1(x)) = \frac{1}{1 - \frac{1-x}{-x}} = x, \quad (1.2)$$

$$f_3(x) = f_0(f_2(x)) = \frac{1}{1-x} = f_0(x), \quad (1.3)$$

$$f_4(x) = f_0(f_3(x)) = \frac{1}{1 - \frac{1}{1-x}} = \frac{1-x}{-x} = f_1(x) \quad (1.4)$$

The function repeats in a similar manner for other values of n as well. From (1.1), (1.2), (1.3) and (1.4),

$$f_{100}(3) = f_1(3) = \frac{1-3}{-3} = \frac{2}{3} \quad (1.5)$$

$$f_1\left(\frac{2}{3}\right) = \frac{1 - \frac{2}{3}}{-\frac{2}{3}} = \frac{-1}{2} \quad (1.6)$$

$$f_2\left(\frac{3}{2}\right) = \frac{3}{2} \quad (1.7)$$

resulting in

$$f_{100}(3) + f_1\left(\frac{2}{3}\right) + f_2\left(\frac{3}{2}\right) = \frac{2}{3} + \frac{-1}{2} + \frac{3}{2} = \frac{5}{3} \quad (1.8)$$

%Octave code for Problem 1

```
clear ;
close ;
clc ;

%begin function
function fn=recr (n, x)

if (rem(n, 3) == 1)
fn = 1./(1 - x) ;           %f0
elseif (rem(n, 3) == 2)
```

```
fn=recr (1, recr (1, x)) ; %f1
```

```
end
```

```
endfunction %end function
```

```
%f100 which is equal to f1
```

```
a=recr (1, recr (100, 3))
```

```
b=recr (1, recr (1, 2/3)) %f1
```

```
c=recr (1, recr (2, 3/2)) %f2
```

```
%Gives the required result
```

```
Sum=a+b+c
```

Problem 2. If $P = \begin{pmatrix} \frac{\sqrt{3}}{2} & \frac{1}{2} \\ -\frac{1}{2} & \frac{\sqrt{3}}{2} \end{pmatrix}$, $A = \begin{pmatrix} 1 & 1 \\ 0 & 1 \end{pmatrix}$ and $Q = PAP^T$, find $P^T Q^{2015} P$.

Solution: Since $Q = PAP^T$,

$$P^T Q^{2015} P = P^T (PAP^T)^{2015} P \quad (2.1)$$

$$= \{(P^T P)A\}^{2015} \quad (2.2)$$

$$= A^{2015} \quad (2.3)$$

since $PP^T = I$. Since, $A = \begin{pmatrix} 1 & 1 \\ 0 & 1 \end{pmatrix}$, $A^2 = \begin{pmatrix} 1 & 2 \\ 0 & 1 \end{pmatrix}$, $A^3 = \begin{pmatrix} 1 & 3 \\ 0 & 1 \end{pmatrix}$, $A^4 = \begin{pmatrix} 1 & 4 \\ 0 & 1 \end{pmatrix}$,

$$P^T Q^{2015} P = \begin{pmatrix} 1 & 2015 \\ 0 & 1 \end{pmatrix} = A^{2015} = \begin{pmatrix} 1 & 2015 \\ 0 & 1 \end{pmatrix}$$

```
clear ;
close ;
clc ;
P=[sqrt(3)/2, 1/2; -1/2, sqrt(3)/2];
A=[1, 1; 0, 1];
Q=P*A*(P');
ANS=(P')*(Q^2015)*P
```

Problem 3. Evaluate $\sum_{r=1}^{15} r^2 \frac{\binom{15}{r}}{\binom{15}{r-1}}$.

Solution:

$$\sum_{r=1}^{15} r^2 \frac{\binom{15}{r}}{\binom{15}{r-1}} = \sum_{r=1}^{15} r^2 \frac{15!}{r! (15-r)!} \times \frac{(r-1)! (15-r+1)!}{15!} \quad (3.1)$$

which can be expressed as

$$\sum_{r=1}^{15} r^2 \frac{(r-1)! (16-r)!}{r! (15-r)!} = \sum_{r=1}^{15} r^2 \frac{(16-r)}{r} \quad (3.2)$$

$$= \sum_{r=1}^{15} (16r - r^2) \quad (3.3)$$

$$= 16 \sum_{r=1}^{15} r - \sum_{r=1}^{15} r^2$$

resulting in

$$16 \left\{ \frac{r(r+1)}{2} \right\} - \frac{r(r+1)(2r+1)}{6} \quad (3.4)$$

$$= \frac{(48r^2 + 48r) - (2r^3 + 3r^2 + r)}{6} \quad (3.5)$$

$$= \frac{-2r^3 + 45r^2 + 47r}{6} \quad (3.6)$$

```
clear ;
close ;
clc ;

%numerical
function c = nCr (n,r)

c = factorial(n) ./ factorial(r) ./
    factorial(n-r);

endfunction

sum = 0;

for r = 1:15
    sum += r^2 * nCr(15,r) /
        nCr(15,r-1);
end;

sum
```

```
clear ;
```

```
%theoretical
```

```
r = 15;
```

```
sum = (-2*r^3 + 45*r^2 + 47*r) ./ 6
```

Problem 4. If

$$\lim_{x \rightarrow \infty} \left(1 + \frac{a}{x} - \frac{4}{x^2} \right)^{2x} = e^3, \quad (4.1)$$

find a .

Solution: Since the above expression is quadratic, let

$$\left(1 + \frac{a}{x} - \frac{4}{x^2} \right)^{2x} = \left[\left(1 + \frac{\alpha}{x} \right) \left(1 - \frac{\beta}{x} \right) \right]^{2x} \quad (4.2)$$

$$= \left[\left(1 + \frac{\alpha}{x} \right)^{\frac{x}{\alpha}} \right]^{2\alpha} \left[\left(1 - \frac{\beta}{x} \right)^{\frac{x}{\beta}} \right]^{2\beta} \quad (4.3)$$

$$\Rightarrow \lim_{x \rightarrow 0} \left[\left(1 + \frac{\alpha}{x} \right)^{\frac{x}{\alpha}} \right]^{2\alpha} \left[\left(1 - \frac{\beta}{x} \right)^{\frac{x}{\beta}} \right]^{2\beta} = e^{2(\alpha-\beta)} \quad (4.4)$$

Thus, from (4.1), (5.2) and (5.3), we obtain

$$a = \alpha - \beta \quad (4.5)$$

$$2(\alpha - \beta) = 3 \quad (4.6)$$

$$\Rightarrow a = \frac{3}{2} \quad (4.7)$$

The following octave code yields Fig. 4 verifying the above result.

```
clear ;
close ;
clc ;

x = 1e3;
a=linspace(0,2,100);
y=(1.+(a./(x)) - (4./(x.^2))) .^(2.*x);
plot(a,y,'LineWidth',4);
z = e^3*ones(1,100);
hold ;
plot(a,z,'ro','LineWidth',4);
xlabel('a')
ylabel('LHS_and_e^3')
legend('LHS','e^3','location','northeast')
grid
```

```
print -deps -color ee16b1004.eps
```

Then

$$c = \frac{a}{b} = 1 + \frac{\pi}{2} \quad (5.9)$$

The following octave code yields Fig. 5 verifying the above result.

```
clear ;
close ;
clc ;
x1=1;
x2=linspace(-1,1,1000);
x3=linspace(1,2,1000);
b=-x1;
a=-x1-acos(b+x1);
c=a./b
y=-x2;
z=a+acos(b+x3);
plot(x3,z,"b", 'LineWidth',4,x2,y,"r", 'LineWidth',4);
axis([-1.5 2.5 -3 1.5]);
grid
xlabel('x')
ylabel('f(x)')
legend('f(x)=a+cos^{-1}(x+b)', 'f(x)=-x');
print -deps -color ee16b1005.eps
```

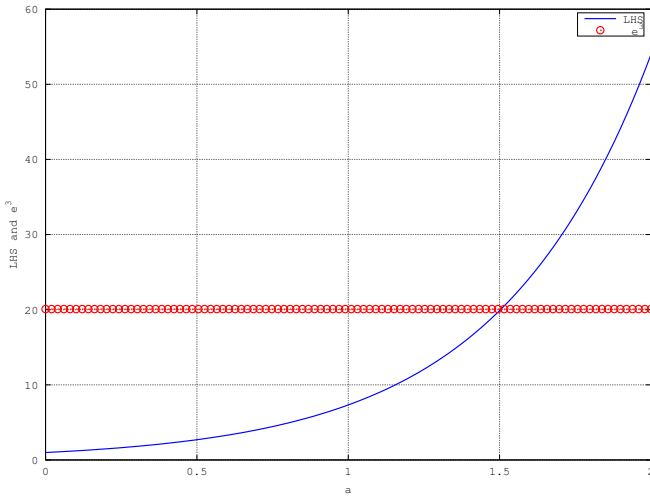


Fig. 4: LHS and RHS in (4.1)

Problem 5. The function

$$f(x) = \begin{cases} -x & x < 1 \\ a + \cos^{-1}(x+b) & 1 \leq x \leq 2 \end{cases} \quad (5.1)$$

is known to be differentiable at $x = 1$. What is the value of $\frac{a}{b}$?

Solution: Since the function is differentiable at $x = 1$,

$$\lim_{x \rightarrow 1^-} f'(x) = \lim_{x \rightarrow 1^+} f'(x) \quad (5.2)$$

Also,

$$\lim_{x \rightarrow 1^-} f'(x) = -1 \quad (5.3)$$

$$\lim_{x \rightarrow 1^+} f'(x) = -\frac{1}{\sqrt{1-(x+b)^2}} \quad (5.4)$$

From (5.2) and (5.3),

$$-\frac{1}{\sqrt{1-(x+b)^2}} = -1 \Rightarrow b = -x = -1 \quad (5.5)$$

Since a differentiable function is also continuous,

$$\lim_{x \rightarrow 1^+} a + \cos^{-1}(x+b) = \lim_{x \rightarrow 1^-} (-x) \quad (5.6)$$

$$\Rightarrow a + \frac{\pi}{2} = -1 \quad (5.7)$$

$$\Rightarrow a = -1 - \frac{\pi}{2} \quad (5.8)$$

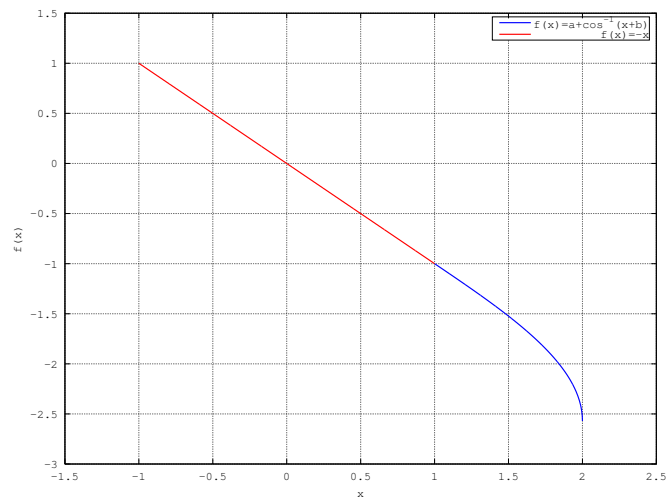


Fig. 5: Substituting the values of a and b in $f(x)$, the graph is smooth at $x = 1$. So $f(x)$ is differentiable at $x = 1$.

Problem 6. The tangent at point P , for the curve $x = 4t^2 + 3, y = 8t^3 - 1$, with parameter $t \in \mathbf{R}$, meets the curve again at Q . Find the coordinates of Q .

Solution: Let P and Q be $(4t^2 + 3, 8t^3 - 1)$ and $(4t_1^2 + 3, 8t_1^3 - 1)$ respectively. At P ,

$$\frac{dy}{dx} = \frac{\frac{dy}{dt}}{\frac{dx}{dt}} = \frac{24t^2}{8t} = 3t. \quad (6.1)$$

Since the tangent at P meets the curve at Q , the equation of the tangent can be expressed as

$$(y - 8t_1^3 + 1) = 3t(x - 4t_1^2 - 3) \quad (6.2)$$

which, upon substitution of coordinates of P yields

$$(8t^3 - 8t_1^3) = 3t(4t^2 - 4t_1^2) \quad (6.3)$$

$$\Rightarrow 8(t_1 - t)(t_1^2 + t_1t + t^2) = 3t \cdot 4(t_1 - t)(t_1 + t)$$

$$\Rightarrow 2(t_1^2 + t_1t + t^2) = 3t(t_1 + t) \quad (6.4)$$

$$\Rightarrow 2t_1^2 - tt_1 - t^2 = 0 \quad (6.5)$$

$$\Rightarrow (t_1 - t)(2t_1 + t) = 0 \quad (6.6)$$

$$\Rightarrow t_1 = -\frac{t}{2} \quad (6.7)$$

Thus, Q can now be expressed as $(t^2 + 3, t^3 - 1)$. To demonstrate the solution of this problem, letting $t = 1$, we obtain P, Q as $(7, 7), (4, -2)$ respectively and the equation of the tangent is

$$y - 7 = 3(x - 7) \quad (6.8)$$

The following code generates the plot in Fig. 6 for this problem.

```
clear ;
close ;
clc ;

t = linspace(-1, 1.2, 100);
x = 4*t.^2+3;
y = 8*t.^3 - 1;
z = 3*(x-7)+7;
plot(x,y,'r','LineWidth',4,x,z,'b',
      'LineWidth',4);
hold
grid
P = [7 7]';
Q = [4 -2]';
text(P(1),P(2)+1,'P')
text(Q(1),Q(2)-1,'Q')
plot([ P(1) Q(1) ],[ P(2) Q(2) ],'
      ro')
legend('curve','tangent','location',
      'southeast')
```

```
xlabel('x');
ylabel('y');
print -deps -color ee16b1006.eps
```

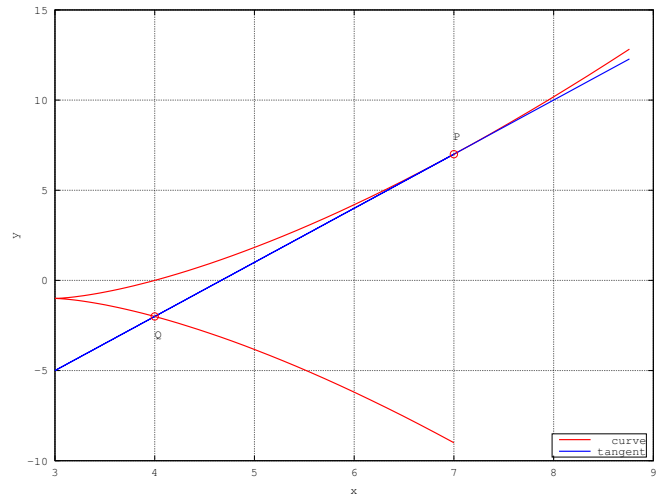


Fig. 6: The tangent at P meets the curve again at Q .

Problem 7. Find the minimum distance of a point on the curve $y = x^2 - 4$ from the origin.

Solution: Let P be the point on the curve closest to the origin. If the coordinates of the the point be (h, k) , then its distance from the origin is given by

$$d^2 = h^2 + k^2 \quad (7.1)$$

Since P lies on the curve,

$$k = h^2 - 4 \quad (7.2)$$

From (7.1) and (7.2),

$$\begin{aligned} d^2 &= k^2 + k + 4 \\ &= \left(k + \frac{1}{2}\right)^2 + \frac{15}{4} \end{aligned} \quad (7.3)$$

Thus, the smallest distance is given by the above equation as $\frac{\sqrt{15}}{2}$. The nearest point is given by (7.2) and (7.3) as $\left(\pm\sqrt{\frac{7}{2}}, -\frac{1}{2}\right)$

The following code yields Figs. 7.1 and 7.2 explaining the solution.

```
close ;
clear ;
clc ;
%For minimising
k=linspace(-5,5,100);
```

```

d = sqrt(k.^2+k+4);
dist=min(d)*ones(100);
plot(k,d,'r','LineWidth',4,k,dist,
      'go','LineWidth',4);
grid
xlabel('k')
ylabel('d')
legend('d','min_d','location','southeast')
print -deps -color ee16b1007a.eps

%For the parabola
x = linspace(-2.5,2.5,100);
y = x.^2-4;
plot(x,y,'b','LineWidth',4);
xlabel('x')
ylabel('y')
axis([-2.5 2.5 -6 1])
grid
hold
P = [sqrt(7/2) -1/2]';
Q = [-sqrt(7/2) -1/2]';
O = [0 0]';
text(P(1),P(2)+0.5,'P')
text(Q(1),Q(2)+0.5,'Q')
text(O(1),O(2)+0.5,'O')
plot([P(1) Q(1) O(1)],[P(2) Q(2)
      O(2)],'ro')
print -deps -color ee16b1007b.eps

```

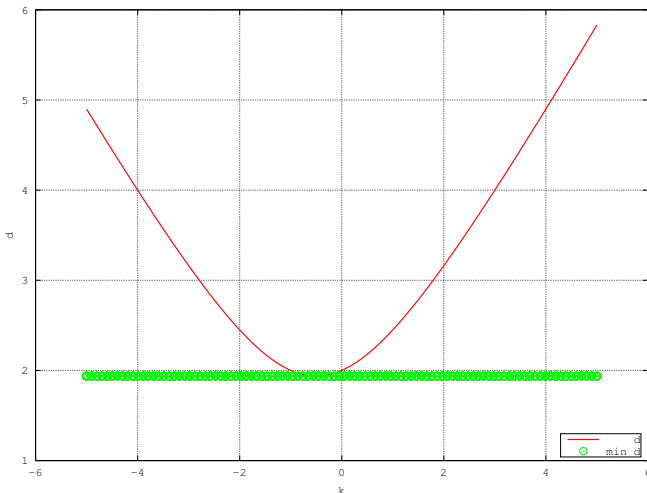


Fig. 7.1: The minimum distance is $\frac{\sqrt{17}}{2}$ for $k = -\frac{1}{2}$

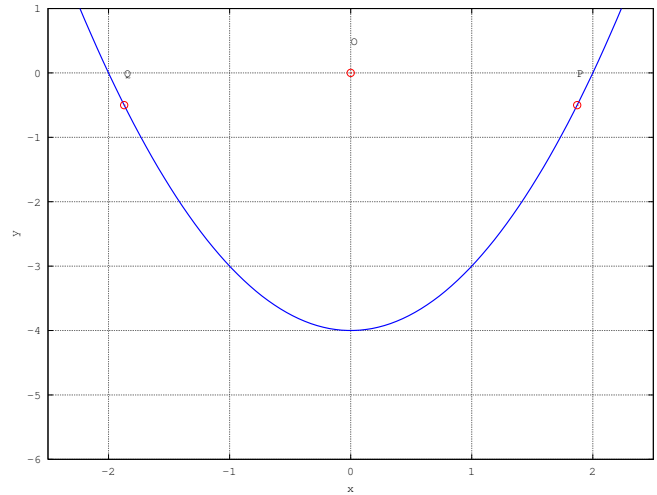


Fig. 7.2: OP and OQ represent the minimum distance of the origin from the parabola.

Problem 8. Sketch the region

$$A = \{(x,y) | y \geq x^2 - 5x + 4, x + y \geq 1, y \leq 0\}. \quad (8.1)$$

Solution: The desired region is plotted in Fig. 8 using the following code.

```

clear;
close;
clc;

x = linspace(1,4,100);
y1=1-x;
y2 = x.^2 -5*x +4;
X = [x, fliplr(x)];
Y=[y1, fliplr(y2)];
area(x,y2,"facecolor","green");
hold on
fill(X,Y,'r');
grid

print ('ee16b1008.eps', '-color')

```

Problem 9. A variable line drawn through the intersection of the lines $\frac{x}{3} + \frac{y}{4} = 1$ and $\frac{x}{4} + \frac{y}{3} = 1$ meets the coordinate axes at A and B , $A \neq B$. Sketch the locus of the midpoint of AB .

Solution: The intersection of the two lines is the solution of the matrix equation

$$\begin{pmatrix} \frac{1}{3} & \frac{1}{4} \\ \frac{1}{4} & \frac{1}{3} \end{pmatrix} \begin{pmatrix} x \\ y \end{pmatrix} = \begin{pmatrix} 1 \\ 1 \end{pmatrix} \quad (9.1)$$

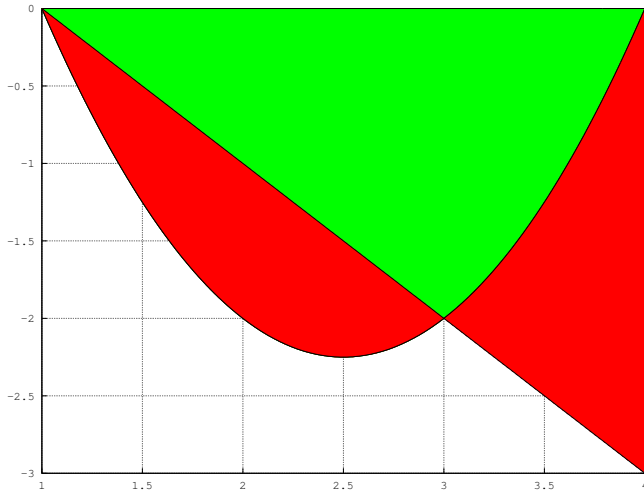


Fig. 8: The desired region is in green colour.

given by $(\frac{12}{7}, \frac{12}{7})$. If A is $(a, 0)$ and B is $(0, b)$, the mid point of AB is $(\frac{a}{2}, \frac{b}{2})$. The equation of the line AB is

$$\frac{x}{a} + \frac{y}{b} = 1 \quad (9.2)$$

From the given information, this line passes through $(\frac{12}{7}, \frac{12}{7})$. Substituting $h = \frac{a}{2}, y = \frac{b}{2}$ in the above and simplifying, the locus is obtained as

$$\frac{1}{h} + \frac{1}{k} = \frac{7}{6} \quad (9.3)$$

The sketch of the locus is available in Fig. 9.

```
clear ;
close ;
clc ;

%point of intersection
A = [1/3 1/4; 1/4 1/3];
b = [1 1]';
u = inv(A)*b

%sketching the locus
h = [linspace(0.5, 5.9/7, 50)
     linspace(6.1/7, 1.2, 50)];
k = 1./(7/6 - 1./h);
stem(h, k)
grid
xlabel('h');
ylabel('k');
print -deps -color ee16b1009.eps
```

Problem 10. The point $(2, 1)$ is translated parallel

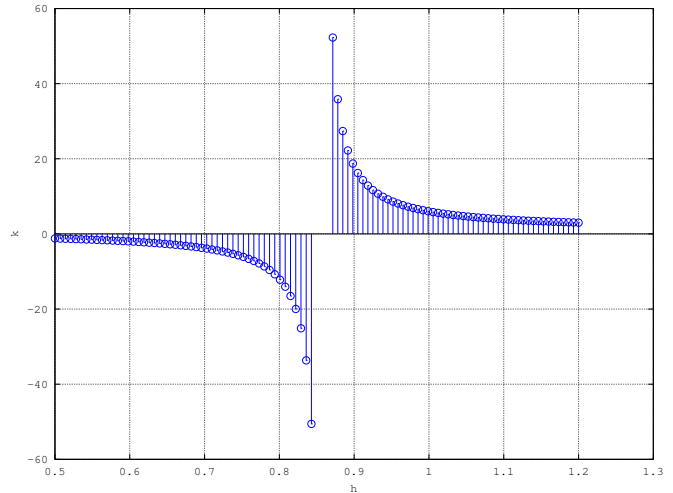


Fig. 9: Locus of the midpoint. Symmetric about the the point $(\frac{6}{7}, 0)$

to the line $L : x - y = 4$ by $2\sqrt{3}$ units to yield the point Q . If Q lies in the 3rd quadrant, sketch the line passing through Q and $\perp L$.

Solution: The slope of the given line is 1 indicating an angle of $\frac{\pi}{4}$. Thus, the coordinates of Q are

$$(2 - 2\sqrt{3} \cos \frac{\pi}{4}, 1 - 2\sqrt{3} \frac{\pi}{4}) = (2 - \sqrt{6}, 1 - \sqrt{6}) \quad (10.1)$$

The equation of the line perpendicular to L can be expressed as

$$x + y = c \quad (10.2)$$

Since this line passes through Q , $c = 3 - 2\sqrt{6}$.

Fig. 10 illustrates this problem.

```
clear ;
close ;
clc ;

function plot_line(a,b, str)
m = (b(2)-a(2))/(b(1)-a(1));
c = a(2)-m*a(1);
x = linspace(a(1),b(1),100);
y = m*x +c;
plot(x,y, str, 'LineWidth', 4);
endfunction

function plot_point(Q, str, offset)
plot(Q(1),Q(2), 'go', 'LineWidth', 4)
text(Q(1)-offset(1),Q(2)-offset(2), str)
endfunction
```

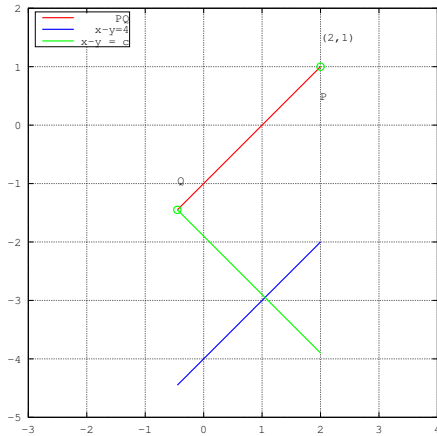


Fig. 10: $c = 3 - 2\sqrt{6}$

```
%Plotting PQ
P = [2 1]';
Q = P - 2*sqrt(3)*cos(pi/4)*[1
    1]';
plot_line(P,Q,'r')
hold on
grid
axis([-3 4 -5 2])
axis equal
plot_point(P,'P',[0 0.5])
plot_point(Q,'Q',[0 -0.5])
text(P(1)-0,P(2)+0.5, '(2,1)')

%Plotting the given line
x = linspace(Q(1),P(1),100);
y = x-4;
plot(x,y,'LineWidth',4)

%Plotting the perpendicular line
y = 3-2*sqrt(6)-x;
plot(x,y,'g','LineWidth',4)
legend('PQ',' ',' ','x-y=4','x-y=-4',
    '','location','northwest')

hold off
print('ee16b1010.eps','-color')
```

Problem 11. A circle passes through $(-2, 4)$ and touches the y -axis at $(0, 2)$. Find out which of the following lines represents the diameter of the circle.

- 1) $4x + 5y - 6 = 0$
- 2) $2x - 3y + 10 = 0$
- 3) $3x + 4y - 3 = 0$
- 4) $5x + 2y + 4 = 0$

Solution: Let the equation of the circle be

$$(x - h)^2 + (y - k)^2 = r^2 \quad (11.1)$$

Since the circle touches the y -axis, the radius of the circle is $|h|$ and $k = 2$. Thus, the equation of the circle can be expressed as

$$(x - h)^2 + (y - 2)^2 = h^2 \quad (11.2)$$

Since the circle passes through the points $(-2, 4)$, substituting these in the above equation yields

$$(h + 2)^2 + 4 = h^2 \quad (11.3)$$

$$\Rightarrow h = -2 \quad (11.4)$$

Thus, the equation of the circle is

$$(x + 2)^2 + (y - 2)^2 = 4 \quad (11.5)$$

Fig. 11 illustrates this problem.

```
clear;
close;
clc;

function plot_point(Q, str, offset)
plot(Q(1),Q(2),'go','LineWidth',4)
text(Q(1)-offset(1),Q(2)-offset(2),
    str)
endfunction
```

```
%Plotting the circle
t = linspace(-pi,pi,100);
r = 2;
x = -2+r*cos(t);
y = 2+r*sin(t);
plot(x,y,'g','LineWidth',4)
grid
hold on
axis([-4 0 0 4])
axis equal
x = linspace(-4,0,100);
y1 = (6-4*x)/5;
y2 = (10+2*x)/3;
y3 = 3/4*(1-x);
y4 = -(4+5*x)/2;
plot(x,y1,'LineWidth',4,x,y2,'
    LineWidth',4,x,y3,'LineWidth',4,
```

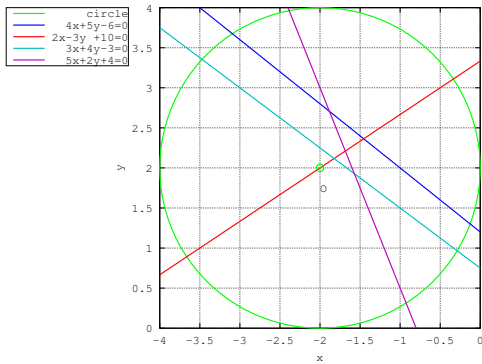


Fig. 11: $2x - 3y + 10 = 0$ is the diameter.

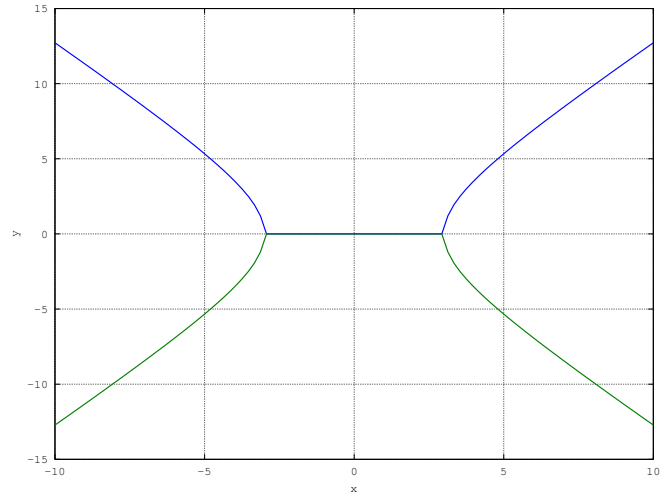


Fig. 12: Sketch of the hyperbola

```
x, y4, 'LineWidth', 4)
plot_point([-2 2], 'O', [0 0.25])
legend('circle', '4x+5y-6=0', '2x-3y
+10=0', '3x+4y-3=0', '5x+2y+4=0',
"location", "northwestoutside")
xlabel('x')
ylabel('y')
hold off
print('ee16b1011.eps', '-color')
```

Problem 12. The eccentricity of a hyperbola satisfies the equation $9e^2 - 18e + 5 = 0$. $(5, 0)$ is a focus and the corresponding directrix is $5x = 9$. Plot the hyperbola.

Solution: The standard equation of hyperbola

$$\frac{x^2}{a^2} - \frac{y^2}{b^2} = 1 \quad (12.1)$$

and the eccentricity is given by

$$e^2 = 1 + \frac{b^2}{a^2} \quad (12.2)$$

The focus of the hyperbola is at $(ae, 0)$, $e > 1$. From the given information,

$$9e^2 - 18e + 5 = 0, \quad (12.3)$$

$$\Rightarrow (3e - 1)(3e - 5) = 0 \quad (12.4)$$

$$(12.5)$$

yielding $e = \frac{1}{3}$ or $e = \frac{5}{3}$. Since $e > 1$, the desired value of the eccentricity is $e = \frac{5}{3}$. Since the focus

is at $(5, 0)$, $a = 3$. From (12.2), substituting for the values of a and e ,

$$1 + \left(\frac{b}{3}\right)^2 = \left(\frac{5}{3}\right)^2. \quad (12.6)$$

$$\Rightarrow b = 4 \quad (12.7)$$

Thus, the equation of the parabola is

$$\frac{x^2}{9} - \frac{y^2}{16} = 1 \quad (12.8)$$

The following code plots the hyperbola in Fig. 12.

```
clear ;
close ;
clc ;

%Plotting the hyperbola
x=linspace(-10,10,100);
y1=sqrt(16*((x.^2)/9-1));
y2=-sqrt(16*((x.^2)/9-1));
plot(x,y1,'LineWidth',4,x,y2,'
LineWidth',4)
grid ;
xlabel('x');
ylabel('y');

print -deps -color ee16b1012.eps
```

Problem 13. Sketch the ellipse $\frac{x^2}{27} + \frac{y^2}{3} = 1$.

Solution: The following code plots the ellipse in Fig. 13


```

clear ;
close ;
clc ;

x=linspace (-3*sqrt(3) ,3*sqrt(3) ,
200) ;
y=(3.0*(1-((x.*x) ./27.0))) .^0.5 ;
z=-(3.0*(1-((x.*x) ./27.0))) .^0.5 ;

plot (x,y,'LineWidth',4,x,z,'
LineWidth',4) ;
grid ;
xlabel('x');
ylabel('y');

print -deps -color ee16b1013.eps

```

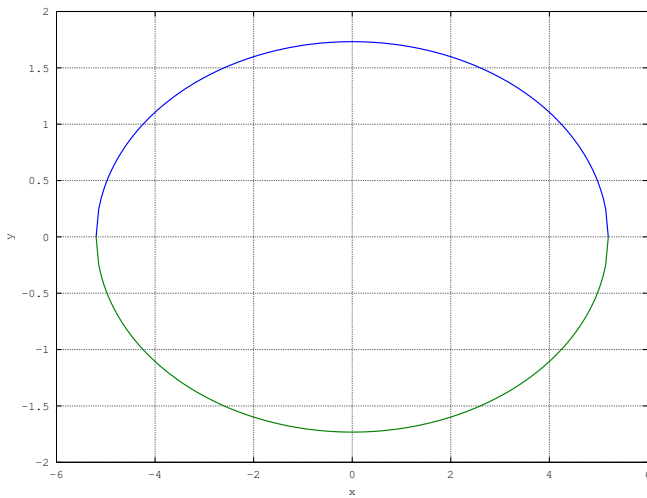


Fig. 13: Graph of ellipse $\frac{x^2}{27} + \frac{y^2}{3} = 1$

Problem 14. Find the minimum and maximum values of $4 + \frac{1}{2} \sin^2 2x - 2 \cos^4 x$, $x \in \mathbf{R}$.

Solution: From the given information,

$$y = 4 + \frac{1}{2} \sin^2 2x - 2 \cos^4 x \quad (14.1)$$

$$= 4 + 2 \sin^2 x \cos^2 x - 2 \cos^4 x \quad (14.2)$$

$$= 2 + 2 \sin^2 x \cos^2 x + 2 \sin^2 x (1 + \cos^2 x) \quad (14.3)$$

$$= 2 + 4 \sin^2 x \cos^2 x + 2 \sin^2 x \quad (14.4)$$

$$= 4 - \cos 2x - \cos^2 2x \quad (14.5)$$

$$= 4 + \frac{1}{4} - \left(\cos 2x + \frac{1}{2} \right) \quad (14.6)$$

From the above, it is obvious that the maximum value is $4\frac{1}{4}$. From the above, we have

$$y = 2 + 2 \sin^2 2x + 2 \sin^2 x \quad (14.7)$$

which has the minimum value of 2 when $\sin x = 0$. The following code verifies the above result.

```

clear ;
close ;
clc ;

x = linspace(-pi , pi , 100) ;
y = 4 + 1/2 * sin(2*x) .^2 - 2 * cos(x)
.^4 ;
plot(x,y,'LineWidth',4) ;
xlabel('x');
ylabel('y');
grid

print ('ee16b1014.eps', '-color')

```

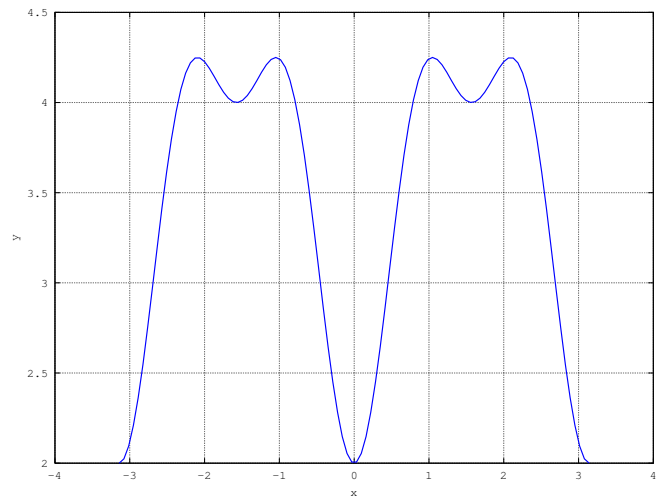


Fig. 14: Minimum value is 2 and maximum is $4\frac{1}{4}$

Problem 15. Find the solution of the equation $\sqrt{2x+1} - \sqrt{2x-1} = 1$, $x \geq \frac{1}{2}$.

Solution: Since

$$\left(\sqrt{2x+1} - \sqrt{2x-1} \right) \left(\sqrt{2x+1} + \sqrt{2x-1} \right) = 2,$$

$$\left(\sqrt{2x+1} + \sqrt{2x-1} \right) = 2$$

$$\Rightarrow \sqrt{2x+1} = \frac{3}{2} \Rightarrow x = \frac{5}{8} \quad (15.1)$$

The graphical solution is available in Fig. 15

```
clear ;
```

```

close ;
clc ;

x= linspace (1/2 ,5 ,50) ;
y2=sqrt (2*x+1)-sqrt (2*x-1) -1;
plot (x,y2, 'LineWidth' ,4)
grid
P = [5/8 0]';
text (P(1)+0.2,P(2)+0.05, 'P')
hold
plot ( P(1),P(2), 'ro', 'LineWidth'
,4)
xlabel ('x');
ylabel ('y');
print -deps -color ee16b1015.eps

```

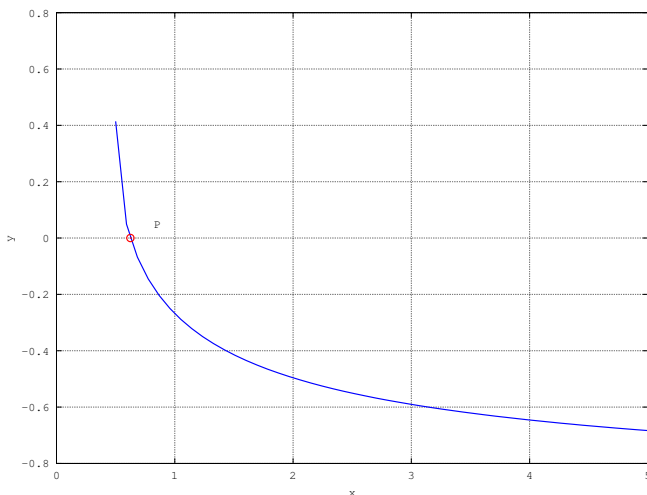


Fig. 15: $\sqrt{2x+1} - \sqrt{2x-1} - 1$ intersects the x -axis at $x = \frac{5}{8}$

Problem 16. Let $z = 1 + ai, a > 0$ be a complex number such that z^3 is a real number. Find $\sum_{k=0}^{11} z^k$.

Solution:

$$z^3 = (1 + ai)^3 \quad (16.1)$$

$$= (1 - 3a^2) + (3a - a^3) \quad (16.2)$$

Since z^3 is a real number,

$$\Im(z) = 0 \quad (16.3)$$

$$\Rightarrow 3a - a^3 = 0 \quad (16.4)$$

Since $a > 0$, the desired solution is $a = \sqrt{3}$. Hence

$z = 1 + \sqrt{3}i = 2e^{\frac{\pi}{3}}$ and

$$\sum_{k=0}^{11} z^k = \frac{(z^{12} - 1)}{z - 1} \quad (16.5)$$

$$= \frac{2^{12} e^{\frac{12\pi}{3}}}{1 + \sqrt{3}i - 1} \quad (16.6)$$

$$= \frac{2^{12}}{\sqrt{3}i} \quad (16.7)$$

The following code provides numerical solutions. a can be found through Fig. 16.

```

clear ;
close ;
clc ;

%Finding a
a=linspace (0 ,2 ,100) ;
i=sqrt (-1) ;
z=1+(a*i) ;
y=imag (z.^3) ;
a_theoretical=roots ([-1 0 3 0]) ;
ind = find (a_theoretical > 0) ;
a_val = a_theoretical (ind)
plot (a,y, 'LineWidth' ,4, a_val,0,
'ro', 'LineWidth' ,4) ;
grid
xlabel ('a')
ylabel ('Im(z)')
legend ('', 'solution', 'location',
'northeast')
print -deps -color ee16b1016.eps

```

%Numerical evaluation of the sum

```
z = 1 + a_val*i;
```

```
pow_z = 0:11;
```

```
sum(z.^pow_z)
```

%Closed form solution

```
2^12/(sqrt(3)*i)
```

Problem 17. $A = \begin{pmatrix} -4 & -1 \\ 3 & 1 \end{pmatrix}$. Find the determinant of $A^{2016} - 2A^{2015} - A^{2014}$.

Solution: The given matrix expression can be simplified as

$$A^{2016} - 2A^{2015} - A^{2014} = A^{2014} (A^2 - 2A - I) \quad (17.1)$$

The characteristic equation for the matrix A is

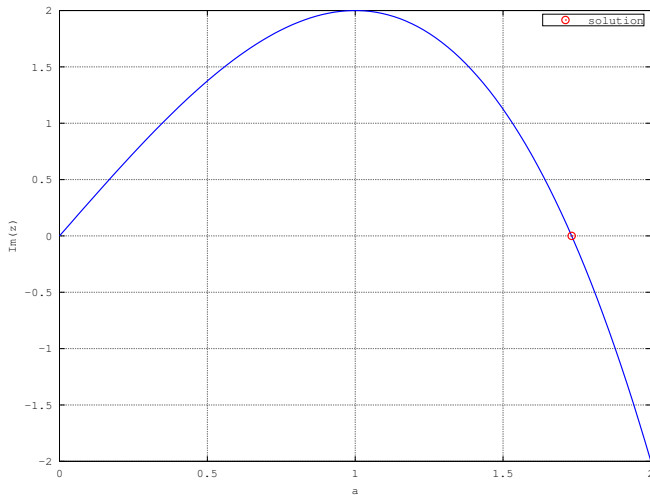


Fig. 16: For positive values, $\mathfrak{J}(z)$ intersects the x -axis at $a = \sqrt{3}$.

obtained as

$$\det(A - \lambda I) = 0 \quad (17.2)$$

$$\Rightarrow (\lambda + 4)(\lambda - 1) + 3 = 0 \quad (17.3)$$

$$\Rightarrow \lambda^2 + 3\lambda - 1 = 0 \quad (17.4)$$

From the Cayley-Hamilton theorem,

$$A^2 + 3A - I = 0 \Rightarrow A^2 - 2A - I = -5A \quad (17.5)$$

Since $\det(A) = -1$, $\det(-5A) = -25$. The following code provides the numerical solution to the given problem.

```
clear ;
close ;
clc ;

A = [-4 -1; 3 1]
det(A^2+3*A-eye(2))
det(A^2-2*A-eye(2))
```

Problem 18. Find the solutions of the following equations

$$n^2 - 3n - 108 = 0$$

$$n^2 + 5n - 84 = 0$$

$$n^2 + 2n - 80 = 0$$

$$n^2 + n - 110 = 0$$

Which of these satisfy $\frac{n+2}{n-2}C_6 = 11$?

Solution: From the following code, the solution to each of the above equations are $n = 12, 7, 8$ and 10

respectively. The given condition can be expressed as

$$\frac{n+2}{n-2}C_6 = 11 \quad (18.1)$$

$$\Rightarrow \frac{(n+2)!}{(n-4)!6!} \frac{(n-4)!}{(n-2)!} = 11 \quad (18.2)$$

$$\Rightarrow \frac{n(n-1)(n+1)(n+2)}{6!} = 11 \quad (18.3)$$

From the above equation, it is obvious that the correct solution is 9. So none of the solutions of the given equations satisfy the given condition. This is verified numerically through the following code.

```
clear ;
close ;
clc ;

%Putting all coefficients of the
%quadratics in a matrix
A = [1 -3 -108;1 5 -84; 1 2 -80; 1
    1 -110];
%finding the size of the matrix
[ row , col ] = size(A);

%looping to find the possible
%solutions
for i=1:row ,
%finding roots for each equation
quad_root = (roots(A(i, :)));
%finding positive roots
sol_index = find(quad_root>0);
sol = quad_root(sol_index);
expr = sol*(sol-1)*(sol+1)*(sol+2)
    /factorial(6)
end
```

Problem 19. Sketch

$$f(x) = \begin{cases} \frac{2x^2}{a} & 0 \leq x < 1 \\ a & 1 \leq x < \sqrt{2} \\ \frac{2b^2-4b}{x^3} & \sqrt{2} \leq x < \infty \end{cases}$$

for (a, b) equal to

1) $(\sqrt{2}, 1 - \sqrt{3})$

2) $(-\sqrt{2}, 1 + \sqrt{3})$

3) $(\sqrt{2}, -1 + \sqrt{3})$

4) $(-\sqrt{2}, 1 - \sqrt{3})$

In which case is $f(x)$ continuous?

Solution: The following octave code generates the following figures

```

clear ;
close ;
clc ;

%all cases
a = sqrt(2)*[1 -1 1 -1 ]; b = 1 +
    sqrt(3)*[-1 1 1 -1];

%intervals
x1 = linspace(0, 1, 100);
x2 = linspace(1, sqrt(2), 100);
x3 = linspace(sqrt(2), 5, 100);

temp = toascii('a');
%Plotting all cases
for i = 1:4,

y1 = 2.*(x1.^2)./a(i);
y2 = a(i);
y3 = (2*(b(i)^2) - 4*b(i))./(x3
    .^3);

figure(i)

plot(x1, y1, "2", 'LineWidth',4, x2
    , y2, "5", 'LineWidth',4, x3, y3
    , "3", 'LineWidth',4);
grid ;

xlabel("x");
ylabel("f(x)");

print ( strcat('ee16b1019',char(
    temp+i-1),'.eps'), '-color')

end

```

Problem 20. Sketch $f(x) = \sin^4 x + \cos^4 x$. Find the intervals within $(0, \pi)$ when it is increasing.

Solution: The following code plots the graph in Fig. 20 outlining the intervals when the function is increasing.

```

clear ;
close ;
clc ;

```

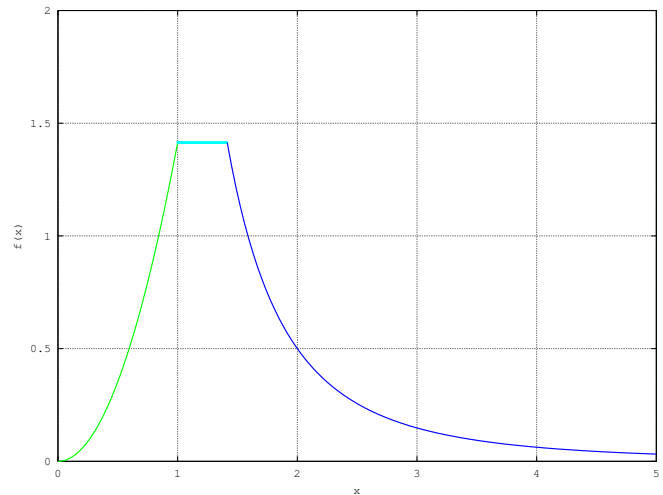


Fig. 19.1: Continuous for $(\sqrt{2}, 1 - \sqrt{3})$

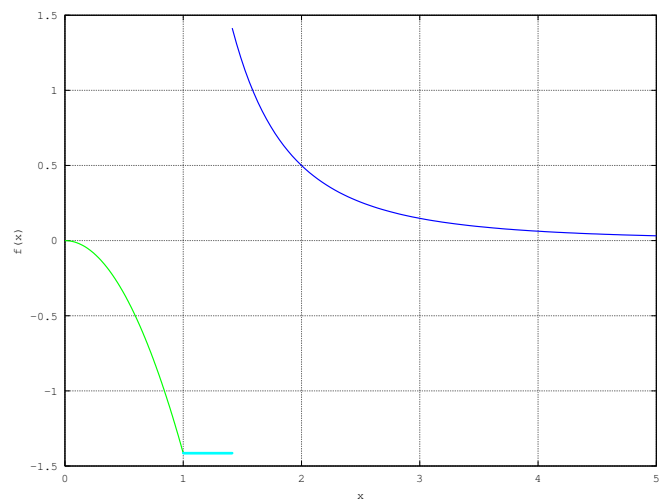


Fig. 19.2: Discontinuous for $(-\sqrt{2}, 1 + \sqrt{3})$

```

x=linspace(0, pi/4, 100);
z=linspace(pi/4, pi/2, 100);
t=linspace(pi/2, 3*pi/4, 100);
s=linspace(3*pi/4, pi, 100);

```

```

y=sin(x).^4+cos(x).^4;
u=sin(z).^4+cos(z).^4;
v=sin(t).^4+cos(t).^4;
w=sin(s).^4+cos(s).^4;

```

```

plot(x,y,"3",z,u,"3",t,v,"3",s,w,
    "3");
hold on;
area(z,u,"facecolor","green");
area(s,w,"facecolor","green");
grid ;

```

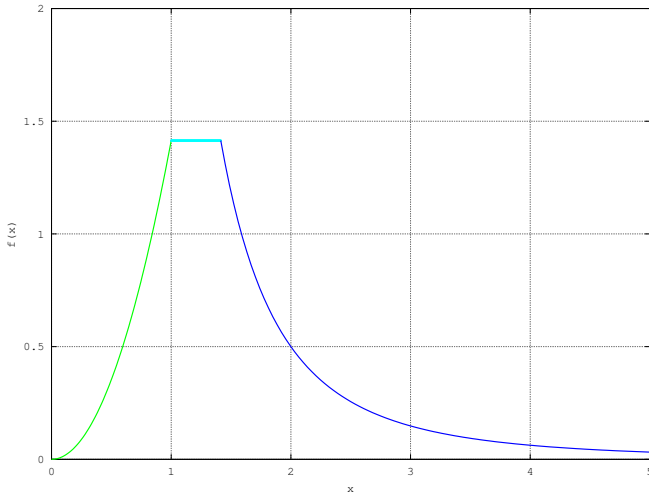


Fig. 19.3: Continuous for $(\sqrt{2}, 1 + \sqrt{3})$

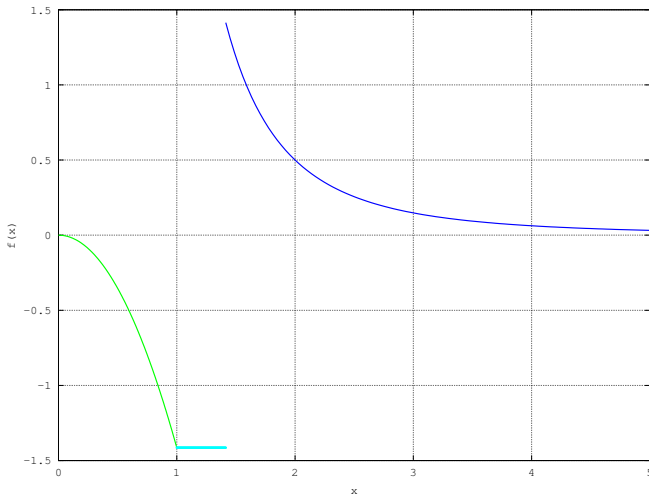


Fig. 19.4: Discontinuous for $(-\sqrt{2}, 1 - \sqrt{3})$

```
xlabel(['0 <= x <= pi']);
ylabel('y = sin^4(x) + cos^4(x)');
print('ee16b1020.eps', '-color')
```

Problem 21. The reflected line is given by $y + 2x = 1$. The surface is given by $7x - y + 1 = 0$. Which of the following is the incident line?

- 1) $41x - 38y + 38 = 0$
- 2) $41x + 25y - 25 = 0$
- 3) $41x + 38y - 38 = 0$
- 4) $41x - 25y + 25 = 0$

Solution: The point at which the reflected line touches the surface is the solution of the equation

$$A = \begin{pmatrix} 2 & 1 \\ 7 & -1 \end{pmatrix} \begin{pmatrix} x \\ y \end{pmatrix} = \begin{pmatrix} 1 \\ -1 \end{pmatrix} \quad (21.1)$$

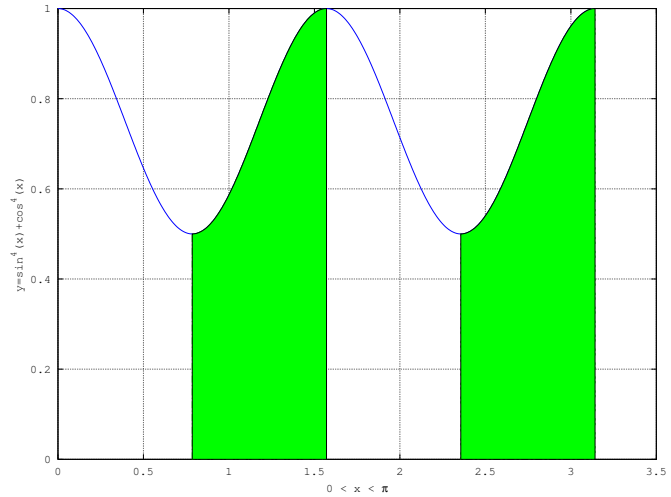


Fig. 20: The green shaded region is where the function is increasing.

$$(21.2)$$

yielding the point $(0, 1)$. Angle between the given line is given

$$\theta = \tan^{-1} \frac{(m_1 - m_2)}{(1 + m_1 * m_2)} \quad (21.3)$$

where m_1, m_2 are slopes of surface and reflected line respectively.

$$\theta = \tan^{-1} \frac{(7 - (-2))}{(1 + 7 * (-2))} \quad (21.4)$$

$$\theta = \tan^{-1} \frac{-9}{13} \quad (21.5)$$

The slope of the incident line can be found by reversing the direction of the angle along the surface. Letting the angle that the incident line makes along the x -axis to be ϕ ,

$$\phi = \tan^{-1} \frac{(m_1 - \tan \theta)}{(1 + m_1 * \tan \theta)} \quad (21.6)$$

$$m = \frac{(7 - \frac{9}{13})}{(1 + 7 * \frac{9}{13})} \quad (21.7)$$

$$m = \frac{(91 - 9)}{(63 + 13)} \quad (21.8)$$

$$m = \frac{41}{38} \quad (21.9)$$

Since m is the slope and 1 is the intercept and thus in slope form equation of line is $y = mx + 1$. Thus

the equation of the incident line is

$$38y = 41x + 38 \quad (21.10)$$

The following code summarises the solution through the plot in Fig. 21

```
close ;
clc ;
clear ;
%Point of intersection
A = [2 1; 7 -1];
b = [1 -1]';
intersect = inv(A)*b

x=linspace(-3,3,5);
z=7*x+1;
plot(x,z,"b",'LineWidth',4);
hold
x=linspace(-3,0,5);
y=1-2*x;
w = 41/38*x+1;
plot(x,w,"g",'LineWidth',4,x,y,"r",
      'LineWidth',4)
grid
legend('surface','incident','
        reflected','location','southwest
        ')
axis([-5 5 -5 5])
axis equal
xlabel('x');
ylabel('y');
print('ee16b1021.eps','-color')
```

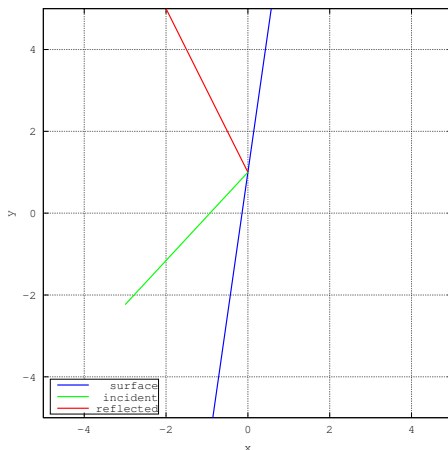


Fig. 21: $41x - 38y + 38 = 0$ is the incident line

Problem 22. The lines $x - y = 1$ and $2x + y = 3$ intersect at O . A circle with centre at point O passes through the point $(-1, 1)$. Sketch the following lines

- 1) $4x + y - 3 = 0$
- 2) $x + 4y + 3 = 0$
- 3) $3x - y - 4 = 0$
- 4) $x - 3y - 4 = 0$

Which of these is a tangent to the circle? At what point?

Solution: The lines $x - y = 1$ and $2x + y = 3$ intersect at the point O , whose coordinates are obtained from the following equation

$$A = \begin{pmatrix} 1 & -1 \\ 2 & 1 \end{pmatrix} \begin{pmatrix} x \\ y \end{pmatrix} = \begin{pmatrix} 1 \\ 3 \end{pmatrix} \quad (22.1)$$

as $(\frac{4}{3}, \frac{1}{3})$. Since the circle has centre at O and passes through the point $(1, -1)$, its radius is

$$r = \sqrt{\left(\frac{4}{3} + 1\right)^2 + \left(\frac{1}{3} - 1\right)^2} = \frac{\sqrt{53}}{3} \quad (22.2)$$

The equation of the circle is then obtained as

$$\left(x - \frac{4}{3}\right)^2 + \left(y - \frac{1}{3}\right)^2 = \frac{53}{9} \quad (22.3)$$

The following octave code plots the circle as well as the various lines in Fig. 22 and shows that no line is a tangent to the circle.

```
clear ;
close ;
clc ;

%Finding point of intersection
A = [1 -1; 2 1];
b = [1 3]';
O = inv(A)*b

%Finding the radius
P = [-1 1]';
r = norm(O-P)

%Intersection plot
x=linspace(-3,5,100);
y=x-1;
z=3-2*x;
plot(x,y,'g','LineWidth',4,x,z,'r',
      'LineWidth',4)
axis("equal")
grid
```

```

hold
%clear;
%close;
%clc;
y=sqrt(53/9 - (x-(4/3)).^2)+1/3;
z=-sqrt(53/9 - (x-(4/3)).^2)
+1/3;
r=3-4*x;
s=-(3+x)./4;
t=3*x-4;
u=(x-4)./3;
plot(x,y,'LineWidth',4,x,z,'
LineWidth',4,x,r,'LineWidth',4,x
,s,'LineWidth',4,x,t,'LineWidth'
,4,x,u,'LineWidth',4)
axis([-3 5 -3 3])
legend('x-y=1','2x-y=3','circle','
circle','4x+y=3','x+4y=3','3x-y
=4','x-3y=4','location','
northwest')
print('ee16b1022.eps','-color')

```

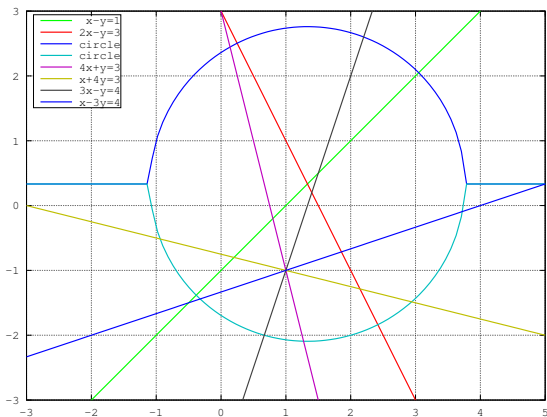


Fig. 22: Since the lines intersect the circle, they are not tangent to it and no point of tangency exists.

Problem 23. P and Q are distinct points on the parabola $y^2 = 4x$, with parameters t and t_1 respectively. The normal at P passes through Q . Find the minimum value of t_1^2 .

Solution: Using the parametric form, the points P and Q can be expressed as $(t^2, 2t)$ and $(t_1^2, 2t_1)$

respectively. The slope of the normal at P is

$$-\frac{dx}{dy} = -\frac{\frac{dx}{dt}}{\frac{dy}{dt}} = -t \quad (23.1)$$

The equation of the normal is then obtained as

$$(y - 2t) = -t(x - t^2) \quad (23.2)$$

$$\Rightarrow 2(t_1 - t) = -t(t_1 - t)(t_1 + t) \quad (23.3)$$

$$\Rightarrow t_1 = -\left(t + \frac{2}{t}\right) \quad (23.4)$$

Thus,

$$t_1^2 = 4 + t^2 + \frac{4}{t^2} \quad (23.5)$$

$$= \left(t - \frac{2}{t}\right)^2 + 8 \quad (23.6)$$

and the minimum value of t_1^2 is obtained from the above as 8. For this value,

$$t - \frac{2}{t} = 0 \Rightarrow t = \pm\sqrt{2} \quad (23.7)$$

The following code provides a visualisation of the problem.

```

clear;
close;
clc;

figure(1);
x=linspace(0,20,100);
y1=2*sqrt(x);
y2=-2*sqrt(x);
plot(x,y1,"3", 'LineWidth',4,x,y2,"
3", 'LineWidth',4);
grid;
xlabel('x')
ylabel('y^2 = 4x')
hold
%Visualisation
temp = sqrt(2)*(0.2:0.2:1.6);
n = length(temp);

for i = 1:n,

t = temp(i);
P = [ t^2 2*t ];
if i == 5
plot(P(1),P(2),'ro','LineWidth',4)
text(P(1),P(2)+0.5,'P')

```

```

else
plot(P(1),P(2),'go','LineWidth',4)
end
y = 2*t - t*(x-t^2);
%hold
plot(x,y,'LineWidth',4)

end
t1 = -2*sqrt(2);
Q = [t1^2,2*t1];
plot(Q(1),Q(2),'ro','LineWidth',4)
text(Q(1),Q(2)-0.5,'Q')

axis equal
axis([0 13 -7 6])

print('ee16b1023.eps','-color')

```

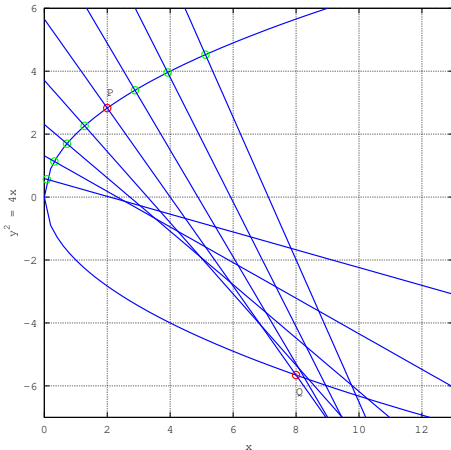


Fig. 23: Normals to the parabola for various values of t plotted. For $t = \sqrt{2}$, $t_1 = -2\sqrt{2}$, $Q(t_1^2 = 8, 2t_1 = -4\sqrt{2})$ has the smallest x -coordinate among all the normals.

Problem 24. The transverse axis of a hyperbola is along the major axis of the conic $\frac{x^2}{3} + \frac{y^2}{4} = 4$. The vertices of the hyperbola are at the foci of this conic. The eccentricity of the hyperbola is $\frac{3}{2}$. Which of the points $(0, 2)$, $(\sqrt{5}, 2\sqrt{2})$, $(\sqrt{10}, 2\sqrt{3})$, $(5, 2\sqrt{3})$, do not lie on the Hyperbola?

Solution: Let the equation of the ellipse be

$$\frac{x^2}{p^2} + \frac{y^2}{q^2} = 1 \quad (24.1)$$

Then the semi-major and semi-minor axes of the ellipse are $q = 4, p = 2\sqrt{3}$ respectively. The eccentricity of the ellipse is

$$\varepsilon = \sqrt{1 - \left(\frac{p}{q}\right)^2} = \frac{1}{2} \quad (24.2)$$

The foci of the ellipse are at $(0, \pm q\varepsilon)$ on the y -axis. Let the equation of the hyperbola be

$$\frac{y^2}{b^2} - \frac{x^2}{a^2} = 1 \quad (24.3)$$

Then $b = q\varepsilon = 2$. Since the eccentricity $e = \frac{3}{2}$,

$$a = b\sqrt{e^2 - 1} = \sqrt{5} \quad (24.4)$$

Thus the equation of the desired hyperbola is

$$\frac{y^2}{4} - \frac{x^2}{5} = 1 \quad (24.5)$$

The following code provides a visualisation of the problem in Fig. 24.

```

clear;
close;
clc;

function plot_point(Q, str, offset)
plot(Q(1),Q(2),'ro','LineWidth',4)
text(Q(1)-offset(1),Q(2)-offset(2), str)
endfunction

%Plotting the ellipse

t = linspace(-pi, pi, 50);
p = 2*sqrt(3);
q = 4;
x = p*cos(t);
y = q*sin(t);
e = sqrt(1 - (p/q)^2);

plot(x,y,'g','LineWidth',4)
axis equal
grid
hold on
plot_point([0 q*e], 'F_1', [0 0.5])
plot_point([0 -q*e], 'F_2', [0
-0.5])

```



```

%Plotting the hyperbola
b = 2;
a = sqrt(5);

x = linspace(-4,4,100);
y1 = b*sqrt(x.^2/a^2 + 1);
y2 = -b*sqrt(x.^2/a^2 + 1);

plot(x,y1,'b','LineWidth',4)

plot(x,y2,'b','LineWidth',4)

pt1 = [0 2]';
pt2 = [sqrt(5) 2*sqrt(2)]';
pt3 = [sqrt(10) 2*sqrt(3)]';
pt4 = [5 2*sqrt(3)]';
%Plotting the given points
%plot_point(pt1,'A',[0 0.5])
plot_point(pt2,'A',[0 -0.5])
plot_point(pt3,'B',[0 0.5])
plot_point(pt4,'C',[0 0.5])

xlabel('x')
ylabel('y')

hold off
print('ee16b1024.eps','-color')

```

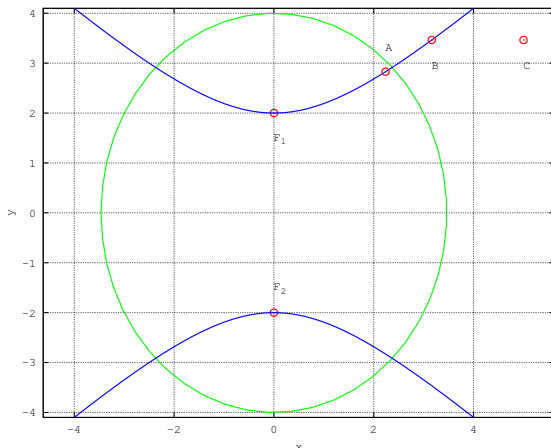


Fig. 24: The point C with coordinates $(5, 2\sqrt{3})$ does not lie on the hyperbola.

Problem 25. Find the minimum value of $\tan A + \tan B$, given that $A + B = \frac{\pi}{6}$, $A > 0$, $B > 0$.

Solution:

$$\tan A + \tan B = \frac{\sin A}{\cos A} + \frac{\sin B}{\cos B} \quad (25.1)$$

$$= \frac{\sin(A+B)}{\cos A \cos B} \quad (25.2)$$

$$= \frac{2 \sin(A+B)}{\cos(A+B) + \cos(A-B)} \quad (25.3)$$

$$= \frac{2}{\sqrt{3} + 2 \cos(A-B)} \quad (25.4)$$

$\therefore A + B = \frac{\pi}{6}$. The above expression is minimum when $\cos(A - B)$ is 1, or $A = B = \frac{\pi}{12}$.

The graph is plotted in Fig. 25

```

clear;
close;
clc;

A = linspace(0, pi/6, 100);
B = (pi./6)-A;

y = tan(A) + tan(B);

min_y = min(y);
min_x = pi/12;

plot(A,y,'LineWidth',4);
hold
plot(min_x,min_y,'ro','LineWidth',4)
grid
xlabel('A_(radians)')
ylabel('tan(A)+tan(B)');
legend('','minimum','location','northeast')
print('ee16b1025.eps','-color');

```

Problem 26. Find θ for which $\frac{2+3i\sin\theta}{1-2i\sin\theta}$ is purely imaginary.

Solution: Simplifying the complex number,

$$\frac{2 + 3i \sin \theta}{1 - 2i \sin \theta} = \frac{(2 + 3i \sin \theta)(1 + 2i \sin \theta)}{1 + 4(\sin \theta)^2} \quad (26.1)$$

$$= \frac{(2 - 6(\sin \theta)^2) + 7i \sin \theta}{1 + 4(\sin \theta)^2} \quad (26.2)$$

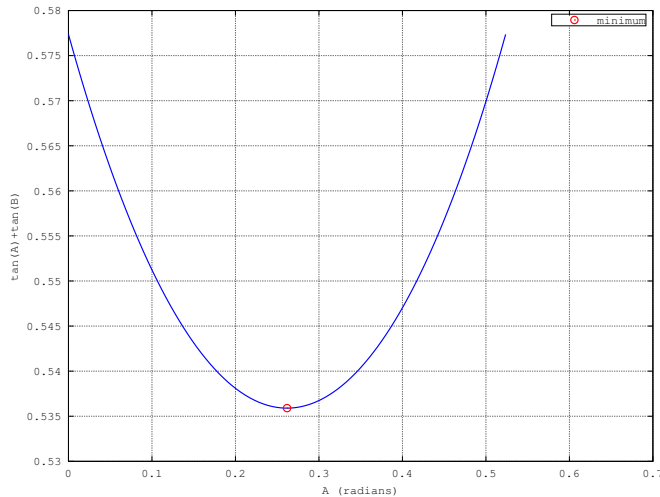


Fig. 25: Finding the minimum of $\tan A + \tan B$, $A + B = \frac{\pi}{6}$

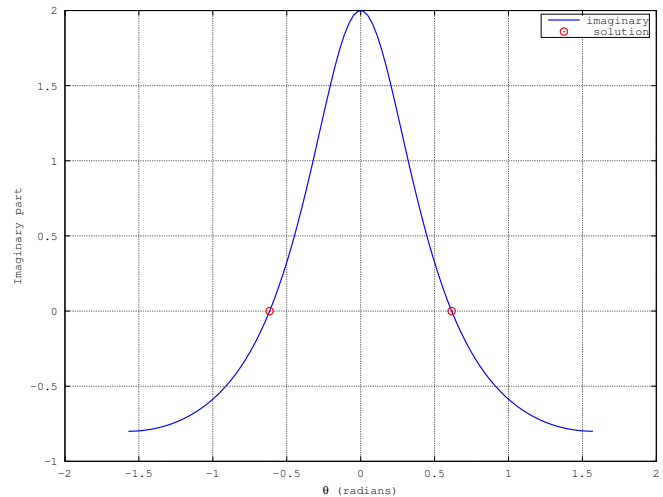


Fig. 26: Complex number is imaginary at $\theta = \arcsin \pm \left(\frac{1}{\sqrt{3}}\right)$

For the number to be purely imaginary,

$$2 - 6(\sin \theta)^2 = 0 \Rightarrow \sin \theta = \pm \frac{1}{\sqrt{3}} \quad (26.3)$$

$$\Rightarrow \theta = \arcsin \pm \left(\frac{1}{\sqrt{3}}\right) \quad (26.4)$$

The graph is plotted in Fig. 26

```
clear ;
close ;
clc ;

theta=linspace(-pi/2 , pi/2 ,100) ;
im_z=(2-6*((sin(theta)).^2))
./(1+4*((sin(theta)).^2)) ;
plot(theta ,im_z , 'LineWidth' ,4)
grid
sol= asin(1/(3.^(1/2)))*[-1 1] ;
im_z_0 = zeros(1,2)
hold
plot(sol ,im_z_0 , 'ro' , 'LineWidth'
,4)
xlabel( '\theta (radians)')
ylabel( 'Imaginary part') ;
legend( 'imaginary' , 'solution' , "
location" , "northeast")
print( 'ee16b1026.eps' , '-color') ;
```

Problem 27. Find the sum of all the solutions of

$$(x^2 - 5x + 5)^{x^2+4x-60} = 1$$

Solution: The solution can be obtained through the

following cases

1) $(x^2 - 5x + 5) = 1$. This yields the solution

$$(x - 1)(x - 4) = 0 \Rightarrow x = 1, 4. \quad (27.1)$$

2) $(x^2 - 5x + 5) = -1$, $(x^2 + 4x - 60)$ even. The first condition yields

$$(x^2 - 5x + 6) = 0 \quad (27.2)$$

$$(x - 3)(x - 2) = 0 \Rightarrow x = 3, 2 \quad (27.3)$$

Testing the solutions for the second condition,

$$x^2 + 4x - 60 = \begin{cases} -39 & x = 3 \\ -48 & x = 2 \end{cases} \quad (27.4)$$

giving $x = 2$ as the desired solution.

3) Making the power 0,

$$x^2 + 4x - 60 = 0 \Rightarrow x = -10, 6. \quad (27.5)$$

Hence the required solutions are $x = 1, 4, 2, 6, -10$ and the sum of these roots is 3.

```
clear ;
close ;
clc ;

%case 1, base 1, any exponent
case1 = roots([1 -5 4])
%case 2, base -1, even exponent
two_root = roots([1 -5 6]) ;
pow_root= polyval([1 4 -60],
two_root) ;
case2 = two_root( find(mod(round(
```

```

pow_root),2)==0))
%case 3, any base, exponent 0
case3 = roots([1 4 -60])
%sum of roots
sum([case1 case2 case3'])

```

Problem 28. The sum of the first 10 terms of the series $(1\frac{3}{5})^2 + (2\frac{2}{5})^2 + (3\frac{1}{5})^2 + 4^2 + (4\frac{4}{5})^2 + \dots$ is $\frac{16}{5}m$. Find m .

Solution: The given sum can be expressed as

$$\left(\frac{4}{5}\right)^2 (2^2 + 3^2 + 4^2 + \dots + 11^2) = \frac{16}{5}m \quad (28.1)$$

$$\Rightarrow \left(\frac{4}{5}\right)^2 \left[\sum_{k=1}^{11} k^2 - 1 \right] = \frac{16}{5}m \quad (28.2)$$

$$\Rightarrow \left(\frac{4}{5}\right)^2 \left(\frac{11 \cdot 12 \cdot 23}{6} - 1 \right) = \frac{16}{5}m \quad (28.3)$$

$$\Rightarrow m = 101 \quad (28.4)$$

```

clear;
close;
clc;

```

```

k = 2:11;
s = (4/5)^2 * sum(k.^2);
m = 5/16 * s

```

Problem 29. $p = \lim_{x \rightarrow 0^+} (1 + \tan^2 \sqrt{x})^{\frac{1}{2x}}$. Find $\log p$.

Solution: From the given information,

$$\log p = \lim_{x \rightarrow 0^+} \frac{1}{2x} \left((1 + \tan^2 \sqrt{x}) \right) \quad (29.1)$$

$$= \frac{1}{2} \lim_{x \rightarrow 0^+} \frac{\tan^2 \sqrt{x}}{\sqrt{x^2}} \frac{1}{\tan^2 \sqrt{x}} \left((1 + \tan^2 \sqrt{x}) \right) \quad (29.2)$$

$$= \frac{1}{2} \quad (29.3)$$

The following code verifies this result in Fig. 29

```

clear;
close;
clc;

x = linspace(-10,10,100);
y = (1./(2.*x)).*log(1+(tan(x)
    .^(1./2)).^2));

```

```

plot(x,y,'LineWidth',4,0,0.5,'ro',
    'LineWidth',4);
xlabel("x");
ylabel("log(p)");
grid;
print('ee16b1029.eps','-color')

```

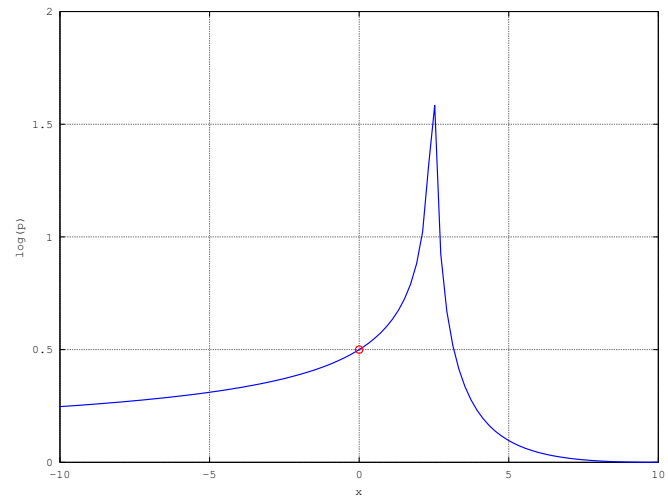


Fig. 29: $\log p = 0.5, x = 0^+$

Problem 30. $f(x) = |\log 2 - \sin x|, x \in \mathbf{R}$ and $g(x) = f(f(x))$. Which of the following is true?

- 1) g is not differentiable at $x = 0$
- 2) $g'(0) = \cos(\log 2)$
- 3) $g'(0) = -\cos(\log 2)$
- 4) g is differentiable at $x = 0$ and $g'(0) = -\sin(\log 2)$.

Solution: The function

$$g(x) = |\log 2 - \sin |\log 2 - \sin x|| \quad (30.1)$$

Sketching this function in Fig. 30 using the following octave code, it is seen that the function is continuous at $x = 0$. Computing the right and left hand limits for $g'(x)$ at $x = 0$ for $h = 10^{-10}$, the octave code shows that

$$\frac{g(h) - g(0)}{h} = \frac{g(0) - g(h)}{h} = \cos(\log 2) \quad (30.2)$$

```

clear;
clc;
close;

function y = f(x)
y = abs(log(2)-sin(x));

```

endfunction

function y = g(x)

y = f(f(x));

endfunction

x = **linspace**(-1,1,100);

plot(x,g(x),'LineWidth',4)

grid

xlabel('x')

ylabel('g(x)')

print('ee16b1030.eps','-color');

h=10.^(-10);

%right hand limit

(g(h)-g(0))/h

%left hand limit

(g(0)-g(-h))/h

%actual limit

cos(**log**(2))

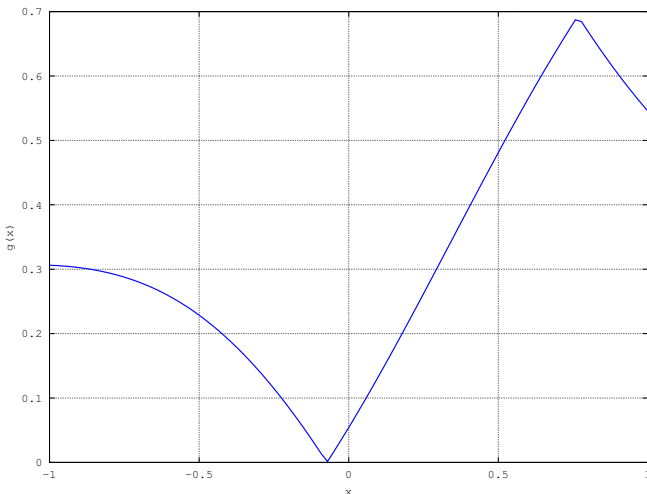


Fig. 30: $g(x)$ continuous at $x = 0$, hence differentiable. $g'(0) = \cos(\log 2)$

Problem 31. Consider

$$f(x) = \tan^{-1} \sqrt{\left(\frac{1 + \sin x}{1 - \sin x}\right)}, x \in \left(0, \frac{\pi}{2}\right)$$

Sketch the normal to $f(x)$ at $x = \frac{\pi}{6}$. Does it pass through any of the points $(0, 0)$, $(0, \frac{2\pi}{3})$, $(\frac{\pi}{6}, 0)$, $(\frac{\pi}{4}, 0)$?

The given function can be simplified as

$$f(x) = \tan^{-1} \sqrt{\frac{1 + \sin(x)}{1 - \sin(x)}} \quad (31.1)$$

$$= \tan^{-1} \sqrt{\frac{2 \cos^2\left(\frac{\pi}{4} - \frac{x}{2}\right)}{2 \cos^2\left(\frac{\pi}{4} - \frac{x}{2}\right)}} \quad (31.2)$$

$$= \tan^{-1} \cot\left(\frac{\pi}{4} - \frac{x}{2}\right) \quad (31.3)$$

$$= \frac{\pi}{4} + \frac{x}{2} \quad (31.4)$$

The normal to $f(x)$ has the equation

$$y = -2x + c, \quad (31.5)$$

where c is a constant. If $x = \frac{\pi}{6}$, $f(x) = \frac{\pi}{3}$. Substituting the coordinates $(\frac{\pi}{6}, \frac{\pi}{3})$ in the equation for the normal, $c = \frac{2\pi}{3}$.

The normal and the given points are plotted in Fig. 31.

clc;

clear;

close;

function plot_point(Q, str, offset)

plot(Q(1),Q(2),'ro','LineWidth',4)

text(Q(1)-offset(1),Q(2)-offset(2), str)

endfunction

x=**linspace**(0,pi/2,100);

y=-2*x + 2*pi/3;

*%z=2*pi/3-2*x;*

plot(x,y,'LineWidth',4);

hold on

plot_point([0 0], '(0,0)', [0 0.5]);

plot_point([0 2*pi/3], '(0,2\pi/3)', [0 0.5]);

plot_point([pi/6 0], '(\pi/6,0)', [0 0.5]);

plot_point([pi/4 0], '(\pi/4,0)', [0 0.5]);

xlabel('x')

ylabel('y')

grid;

hold off

print('ee16b1031.eps','-color')

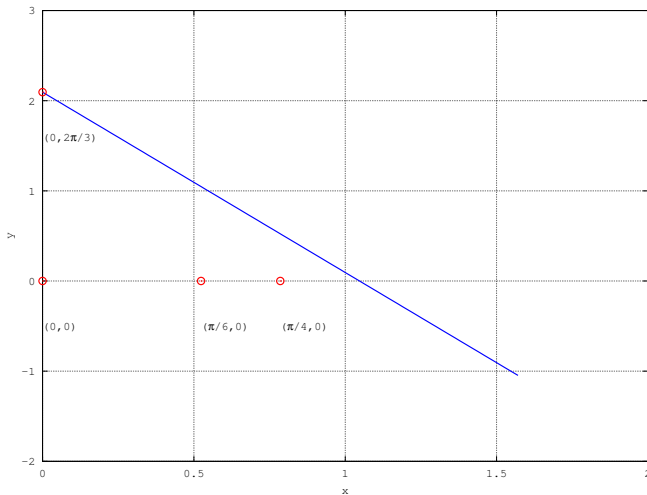


Fig. 31: The normal passes through the point $(0, \frac{2\pi}{3})$.

Problem 32. Sketch $\left[\frac{(n+1)(n+2)\dots(3n)}{n^{2n}}\right]^{\frac{1}{n}}$ and verify if its limit at $n \rightarrow \infty$ is $\frac{18}{e^4}$, $\frac{27}{e^2}$, $\frac{9}{e^2}$ or $3 \log 3 - 2$.

Solution: The given expression can be simplified as

$$p_n = \left[\frac{(n+1)(n+2)\dots(3n)}{n^{2n}}\right]^{\frac{1}{n}} = \left[\frac{(3n)!}{n!n^{2n}}\right]^{\frac{1}{n}} \quad (32.1)$$

From Stirling's formula, for large n ,

$$n! \sim \sqrt{2\pi n} \left(\frac{n}{e}\right)^n. \quad (32.2)$$

Substituting the above in (32.1),

$$\left[\frac{(3n)!}{n!n^{2n}}\right]^{\frac{1}{n}} = \left[\frac{\sqrt{2\pi(3n)} \left(\frac{3n}{e}\right)^{3n}}{\sqrt{2\pi n} \left(\frac{n}{e}\right)^n \cdot n^{2n}}\right]^{\frac{1}{n}} \quad (32.3)$$

$$= \left[\frac{\sqrt{3} (3)^{3n}}{e^{2n}}\right]^{\frac{1}{n}} = \frac{27}{e^2} \quad (32.4)$$

in the limit. This solution agrees with the plot of p_n shown in Fig. 32.

```

clc;
clear;
close;

maxlen = 20;
for n = 1:maxlen,
k = 1:2*n;
p(n) = (prod(n+k)/(n^(2*n)))^(1/n);
end

stem(1:maxlen,p,'r','LineWidth',4)

```

```

hold
sol = [18/e^4 27/e^2 9/e^2 3*log(3)-2];
%stem(sol,'b','LineWidth',4)
y = ones(1,maxlen);
plot(1:maxlen,sol(1)*y,'b','LineWidth',4)
plot(1:maxlen,sol(2)*y,'g','LineWidth',4)
plot(1:maxlen,sol(3)*y,'m','LineWidth',4)
plot(1:maxlen,sol(4)*y,'c','LineWidth',4)
hold off
legend('','18/e^4','27/e^2','9/e^2','3*log(3)-2','location','northeast');
xlabel('n')
ylabel('p_n')
grid;
hold off
print('ee16b1032.eps','-color')

```

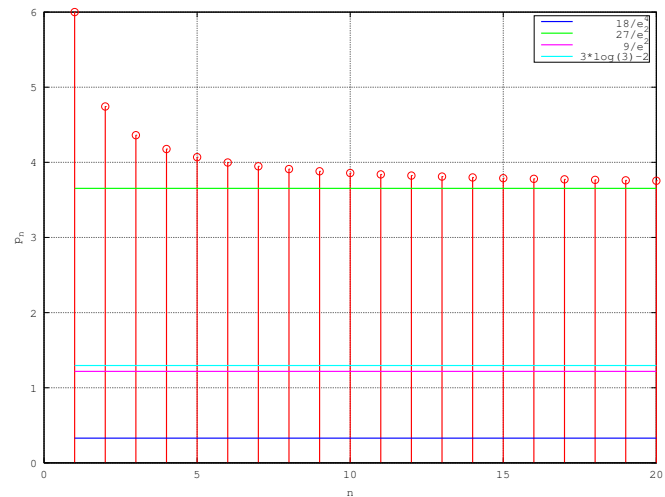


Fig. 32: In the limit, the expression converges to $\frac{27}{e^2}$

Problem 33. Sketch the region

$$\{(x, y) : y^2 \geq 2x, x^2 + y^2 \leq 4x, x \geq 0, y \geq 0\}$$

Solution: The following code plots the desired region in Fig. 33.

```

clear;
close;
clc;
x=linspace(0,4,100);

```

```

y1=(2.*x).^0.5;
y2=(4.*x-x.^2).^0.5;
area(x, max([y1; y2]), "
    FaceColor", "green");
hold on
area(x,y1,"facecolor","red");
plot(x,y2,'b')
grid
hold off
print('ee16b1033.eps','-color')

```

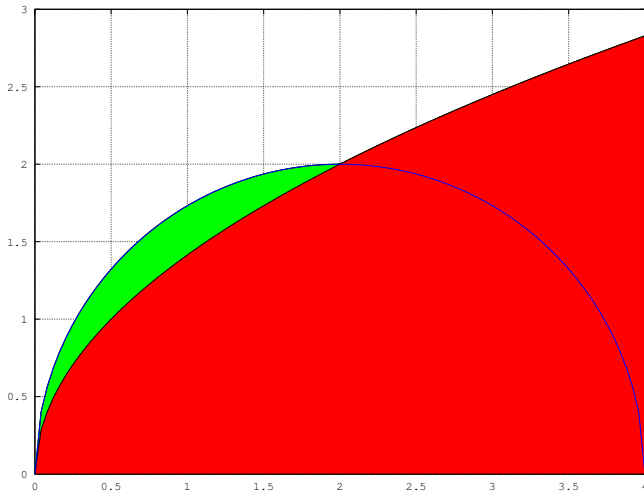


Fig. 33: Desired region is in green colour

Problem 34. Two sides of a rhombus are along the lines $x - y + 1 = 0$ and $7x - y - 5 = 0$. Its diagonals intersect at $(-1, -2)$. Find the vertices of the rhombus.

Solution: The point of intersection of the two lines is one vertex of the rhombus. This point is obtained by solving the following matrix equation

$$\begin{pmatrix} 1 & -1 \\ 7 & -1 \end{pmatrix} \mathbf{x} = \begin{pmatrix} -1 \\ 5 \end{pmatrix} \quad (34.1)$$

using the octave code to obtain the point $P(1, 2)$. Since diagonals of a rhombus bisect each other and the point of intersection O is given as $(-1, -2)$ the coordinates of the opposite vertex R are given by

$$\mathbf{x} + \begin{pmatrix} 1 \\ 2 \end{pmatrix} = 2 \begin{pmatrix} -1 \\ -2 \end{pmatrix} \Rightarrow \mathbf{x} = \begin{pmatrix} -3 \\ -6 \end{pmatrix} \quad (34.2)$$

Since the sides of a rhombus are equal, if the

unknown vertex Q has coordinates (x, y) ,

$$PQ = QR \Rightarrow (x - 1)^2 + (y - 2)^2 = (x + 3)^2 + (y + 6)^2 \\ \Rightarrow x + 2y = -5 \quad (34.3)$$

Note that the above locus is actually the diagonal QS . Letting PQ be

$$x - y + 1 = 0, \quad (34.4)$$

Q is obtained from the following equation

$$\begin{pmatrix} 1 & 2 \\ 1 & -1 \end{pmatrix} \mathbf{x} = \begin{pmatrix} -5 \\ -1 \end{pmatrix} \quad (34.5)$$

as $(-\frac{7}{3}, -\frac{4}{3})$. Similarly, letting PS to be

$$7x - y - 5 = 0, \quad (34.6)$$

S is obtained from the equation

$$\begin{pmatrix} 1 & 2 \\ 7 & -1 \end{pmatrix} \mathbf{x} = \begin{pmatrix} -5 \\ 5 \end{pmatrix} \quad (34.7)$$

as $(\frac{1}{3}, -\frac{8}{3})$.

Fig. 34 explains the problem.

```

clear;
close;
clc;

```

```

function plot_line(a,b, str)
m = (b(2)-a(2))/(b(1)-a(1));
c = a(2)-m*a(1);
x = linspace(a(1),b(1),100);
y = m*x + c;
plot(x,y, str, 'LineWidth', 4);
endfunction

```

```

function plot_point(Q, str, offset)
plot(Q(1),Q(2), 'ro', 'LineWidth', 4)
text(Q(1)-offset(1),Q(2)-offset(2),
    str)
endfunction

```

```

%Matrix representation for finding
P

```

```

A = [1 -1; 7 -1];
b = [-1; 5];
P = inv(A) * b

```

```

%Matrix representation for finding
Q

```

```

A = [1 2; 1 -1];
b = [-5; -1];

```

```

Q=inv(A)*b
%Matrix representation for finding
S
A =[1 2;7 -1];
b=[ -5;5];
S=inv(A)*b
%
R = [-3 -6]';
O = [-1 -2]';

%Plotting the rhombus
plot_line(P,Q,'r')
hold on
plot_line(S,P,'g')
plot_line(Q,S,'b')
plot_line(Q,R,'c')
plot_line(R,S,'m')

plot_point(P,'P',[0 0.5])
plot_point(Q,'Q',[0 0.5])
plot_point(R,'R',[0 0.5])
plot_point(S,'S',[0 0.5])
plot_point(O,'O',[0 0.5])

hold off
grid
axis equal
legend('x-y=1','x+2y=-5','7x-y=5',
"location","northeast")
xlabel('x')
ylabel('y')
print('ee16b1034.eps','-color')

```

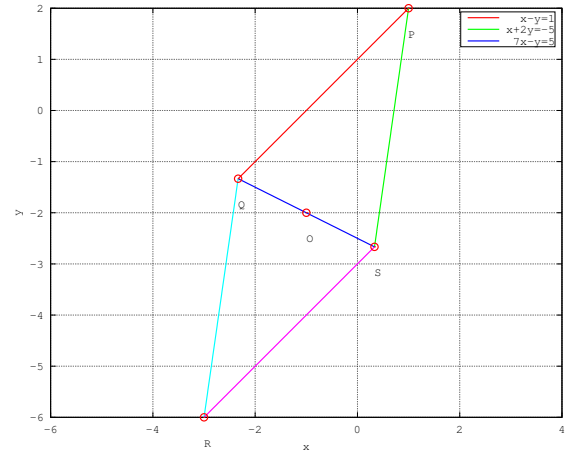


Fig. 34: Desired rhombus.

cles is equal to distance between them. Hence,

$$|k| + 6 = \sqrt{(h-4)^2 + (k-4)^2} \quad (35.2)$$

$$\Rightarrow k^2 + 12|k| + 36 = (h-4)^2 + k^2 - 8k + 16 \quad (35.3)$$

$$\Rightarrow 12|k| + 8k = (h-4)^2 - 20 \quad (35.4)$$

$$\Rightarrow k = \begin{cases} \frac{(h-4)^2 - 20}{20} & k > 0 \\ -\frac{(h-4)^2 - 20}{4} & k < 0 \end{cases} \quad (35.5)$$

- 2) *Internal*: Modulus of difference of radius of two circles is equal to distance between them. hence

$$||k| - 6| = \sqrt{(h-4)^2 + (k-4)^2} \quad (35.6)$$

$$\Rightarrow k^2 - 12|k| + 36 = (h-4)^2 + k^2 - 8k + 16 \quad (35.7)$$

$$\Rightarrow -12|k| + 8k = (h-4)^2 - 20 \quad (35.8)$$

$$\Rightarrow k = \begin{cases} \frac{(h-4)^2 - 20}{20} & k < 0 \\ -\frac{(h-4)^2 - 20}{4} & k > 0 \end{cases} \quad (35.9)$$

Problem 35. Sketch the locus of the centres of circles which touch the circle $x^2 + y^2 - 8x - 8y - 4 = 0$ as well as the x -axis.

Solution: The given circle can be expressed in standard form as

$$(x-4)^2 + (y-4)^2 = 6^2 \quad (35.1)$$

i.e., the circle has centre at (4,4) and radius 6. Let (h,k) be the centre of a circle that touches the given circle. Since this circle touches the x -axis, its radius is k . This circle can touch the given circle internally or externally.

- 1) *External*: In this case, sum of radius of two cir-

Both the above cases can be combined to obtain the

locus as the curves

$$y = \frac{(x-4)^2}{20} - 1 \quad (35.10)$$

$$y = 5 - \frac{(x-4)^2}{4} \quad (35.11)$$

```
clear ;
close ;
clc ;

%Plotting the circle
t = linspace(0,2*pi,100);
x = 6.*cos(t) + 4;
y = 6.*sin(t) + 4;
plot(x,y,'r','LineWidth',4)
hold on

%Plotting the Loci
x = linspace(-3,12,100);
y1 = (x-4).^2/20 -1;
y2 = 5 - (x-4).^2/4;
plot(x,y1,'g','LineWidth',4,x,y2,'b','LineWidth',4)

grid ;
ylabel('y')
xlabel('x')
legend('circle','locus_1','locus_2');
axis([-5 12 -5 10])
axis("equal");
print('ee16b1035.eps','-color')
```

Problem 36. One of the diameters of the circle $x^2 + y^2 - 4x + 6y - 12 = 0$ is a chord of a circle S . The centre of S is at $(-3, 2)$. Sketch S and find its radius.

Solution: The given circle can be expressed in standard form as

$$(x-2)^2 + (y+3)^2 = 5^2 \quad (36.1)$$

i.e., the circle has centre at O with coordinates $(2, -3)$ and radius 5. Using the distance formula, $OS = 5\sqrt{2}$. Let the radius of the circle with centre at S be r . r can be obtained using Budhayana's theorem as

$$r^2 = 5^2 + OS^2 \quad (36.2)$$

$$\Rightarrow r = 5\sqrt{3} \quad (36.3)$$

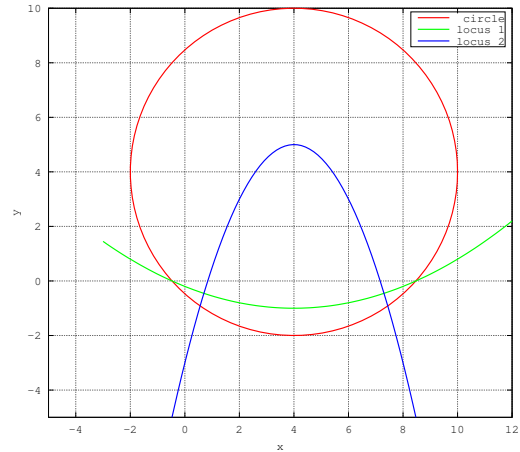


Fig. 35: Required loci.

The diameter of the circle with centre O and chord of circle with centre S is perpendicular to OS . The equation of the diameter is thus obtained as

$$(y+3) = (x-2) \Rightarrow y = x-5 \quad (36.4)$$

Fig. 36 summarises the problem.

```
clear ;
close ;
clc ;

function plot_line(a,b, str)
m = (b(2)-a(2))/(b(1)-a(1));
c = a(2)-m*a(1);
x = linspace(a(1),b(1),100);
y = m*x +c;
plot(x,y, str, 'Linewidth',4);
endfunction

function plot_point(Q, str, offset)
plot(Q(1),Q(2),'ro','Linewidth',4)
text(Q(1)-offset(1),Q(2)-offset(2), str)
endfunction

%Plotting the circle with centre O
t = linspace(0,2*pi,100);
x = 5.*cos(t) + 2;
y = 5.*sin(t) - 3;
plot(x,y,'g','LineWidth',4)
axis("equal");
grid
```



```

hold on

%Plotting the diameter
y = x - 5;
plot(x,y,'c','LineWidth',4)

%Plotting the centres
S = [-3 2]';
plot_point(S,'S',[0 1]);
O = [2 -3]';
plot_point(O,'O',[0 1]);
%plotting line joining the circles
plot_line(O,S,'b')
%Plotting the circle with centre S
t = linspace(0,2*pi,100);
r = 5*sqrt(3);
x = r.*cos(t) - 3;
y = r.*sin(t) + 2;
plot(x,y,'m','LineWidth',4)
hold off

print ('ee16b1036.eps', '-color')

```

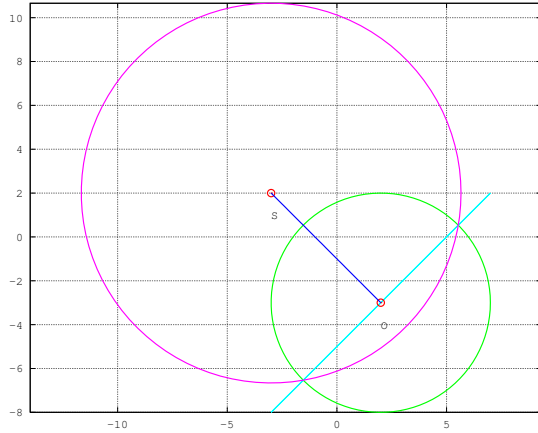


Fig. 36: The diameter of circle with centre O is a chord of the circle with centre S .

Problem 37. P is the nearest point of the parabola $y^2 = 8x$ to the centre C of the circle $x^2 + (y + 6)^2 = 1$. Sketch the circle with centre P and passing through C .

Solution: Let P be denoted by $(2t^2, 4t)$. Let the centre of the circle $(0, -6)$ be O . Then

$$OP^2 = (2t^2 - 0)^2 + (4t + 6)^2 = 4(t^4 + 4t^2 + 12t + 9) \quad (37.1)$$

Differentiating OP^2 with respect to t and equating to 0 results in

$$t^3 + 2t + 3 = 0 \quad (37.2)$$

$$\Rightarrow (t + 1)(t^2 - t + 3) = 0 \quad (37.3)$$

$$(37.4)$$

yielding $t = -1$. Thus, P is $(2, -4)$ and $OP = 2\sqrt{2}$. The equation of the desired circle is

$$(x - 2)^2 + (y + 4)^2 = 8 \quad (37.5)$$

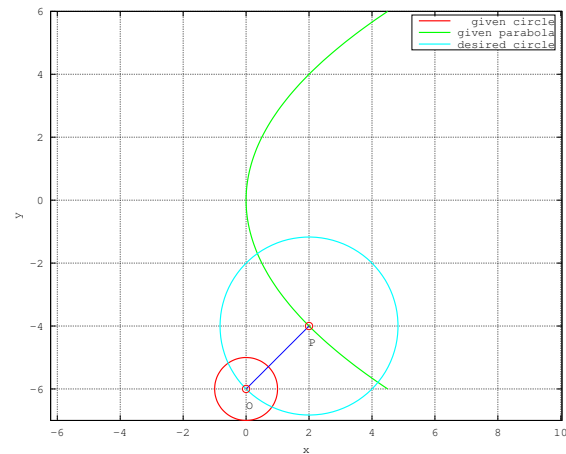


Fig. 37.1: Figures for the given problem

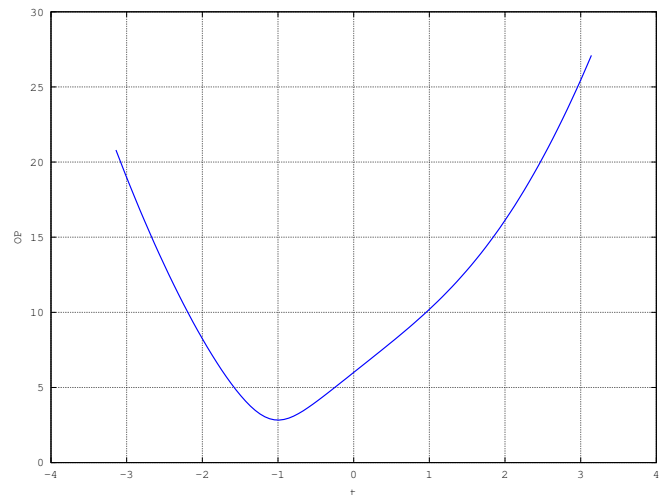


Fig. 37.2: OP has a minimum at $t = -1$.

Problem 38. The length of the latus rectum of a hyperbola is 8 and the length of its conjugate axis is half the distance between its foci. Sketch the hyperbola and find its eccentricity.

Solution: Let the equation of the hyperbola be

$$\frac{x^2}{a^2} - \frac{y^2}{b^2} = 1 \quad (38.1)$$

Since the length of the latus rectum is 8,

$$\frac{2b^2}{a} = 1 \quad (38.2)$$

The length of the conjugate axis is $2b$ and the distance between the foci is $2ae$, $e = \sqrt{1 + \frac{b^2}{a^2}}$, where e is the eccentricity. Given that $2b = \frac{2ae}{2}$. From the given information,

$$2b = \sqrt{a^2 + b^2} \quad (38.3)$$

Since $a = 2b^2$, from the above equation, $b = \frac{\sqrt{3}}{2}$ and $a = \frac{3}{2}$. The eccentricity

$$e = \frac{2}{\sqrt{3}} \quad (38.4)$$

The desired hyperbola is plotted in Fig. 38.

```
clear;
close;
clc;

function plot_point(Q, str, offset)
plot(Q(1), Q(2), 'ro', 'LineWidth', 4)
text(Q(1)-offset(1), Q(2)-offset(2), str)
endfunction

%Plotting the hyperbola
a = 3/2;
b = sqrt(3)/2;
e = sqrt(1 + (b/a)^2)

x = linspace(-4, 4, 100);
y1 = b*sqrt(x.^2/a^2 - 1);
y2 = -b*sqrt(x.^2/a^2 - 1);

plot(x, y1, 'g', 'LineWidth', 4)
hold
plot(x, y2, 'g', 'LineWidth', 4)
grid

%Plotting the foci
F1 = [a*e 0]';
F2 = [-a*e 0]';
```

```
plot_point(F1, 'F_1', [-0.5 0])
plot_point(F2, 'F_2', [0.5 0])

xlabel('x')
ylabel('y')
print('ee16b1038.eps', '-color')
```

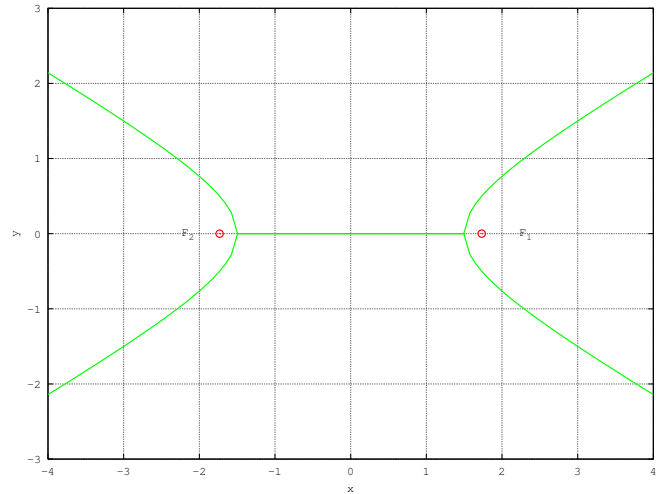


Fig. 38: Foci at F_1 and F_2 . Eccentricity $e = \frac{2}{\sqrt{3}}$

Problem 39. A wire of length 2 units is cut into two parts which are bent respectively to form a square of side x units and a circle of radius of r units. Find x if the sum of the areas of the square and the circle so formed is minimum.

Solution: From the given information, adding the perimeters of the square and the circle,

$$4x + 2\pi r = 2 \Rightarrow 2x + \pi r = 1 \quad (39.1)$$

The sum of the areas of the square and circle is

$$A = x^2 + \pi r^2 = x^2 + \frac{(1 - 2x)^2}{\pi} \quad (39.2)$$

$$= \frac{(\pi + 4)x^2 - 4x + 1}{\pi} \quad (39.3)$$

$$= \left(1 + \frac{4}{\pi}\right) \left\{ \left(x - \frac{2}{(\pi + 4)}\right) + \frac{1}{(\pi + 4)} - \left(\frac{2}{(\pi + 4)}\right)^2 \right\} \quad (39.4)$$

Thus, A is minimum for $x = \frac{2}{\pi + 4}$. We obtain

$$r = \frac{1 - \frac{4}{4 + \pi}}{\pi} = \frac{1}{\pi + 4} = \frac{x}{2} \quad (39.5)$$

Let P be denoted by $(2t^2, 4t)$. Let the centre of the

circle $(0, -6)$ be O . Then

$$OP^2 = (2t^2 - 0)^2 + (4t + 6)^2 = 4(t^4 + 4t^2 + 12t + 9) \quad (39.6)$$

Differentiating OP^2 with respect to t and equating to 0 results in

$$t^3 + 2t + 3 = 0 \quad (39.7)$$

$$\Rightarrow (t + 1)(t^2 - t + 3) = 0 \quad (39.8)$$

$$(39.9)$$

yielding $t = -1$. Thus, P is $(2, -4)$ and $OP = 2\sqrt{2}$. The equation of the desired circle is

$$(x - 2)^2 + (y + 4)^2 = 8 \quad (39.10)$$

Fig. 39 plots A with respect to x .

```
clear ;
close ;
clc ;

function plot_point(Q, str , offset)
plot(Q(1) ,Q(2) , 'ro ')
text(Q(1)-offset(1) ,Q(2)-offset(2)
, str)
endfunction

function A = f(x)
A = x.^2 + (1-2*x).^2/pi ;
endfunction

x = linspace(0,1,20) ;

plot(x, f(x) , 'g' , 'LineWidth' ,4)
hold on

x = 2/(pi+4) ;

P = [x f(x)] ;

r = (1 - 2*x)/pi

plot_point(P, 'P' ,[0 -0.1] , '
LineWidth' ,4)
hold off
xlabel('x')
ylabel('A')
legend(' ', 'minimum')

print ('ee16b1039.eps' , '-color')
```

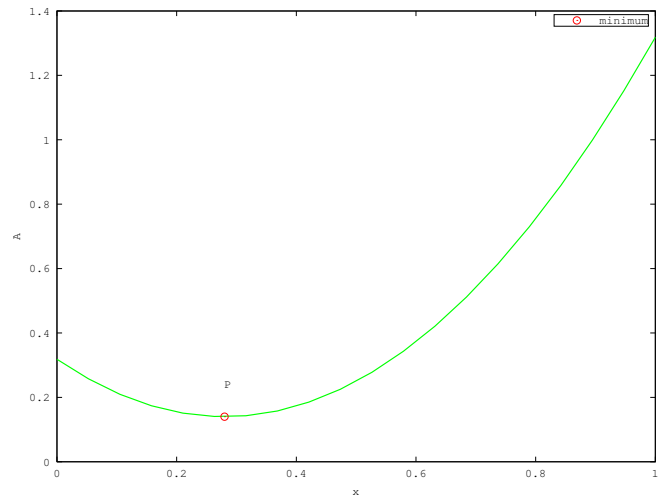


Fig. 39: Area is minimum for $x = \frac{2}{\pi+4}$